


# Counting by 11's (D)

Fill in the blanks.




11

—

—

—

—



—

77

—

—

—




121

—

—

—

—




176

187

—

—

220




—

—

—

—

—



286

—

—

—

—

# Counting by 11's (D) Answers

Fill in the blanks.



11

22

33

44

55



66

77

88

99

110



121

132

143

154

165



176

187

198

209

220



231

242

253

264

275



286

297

308

319

330