

Counting by 100's (A)

Fill in the blanks.



100



700



1300





2100

2200

2400



2700

2800

Counting by 100's (A) Answers

Fill in the blanks.




100

200

300

400

500



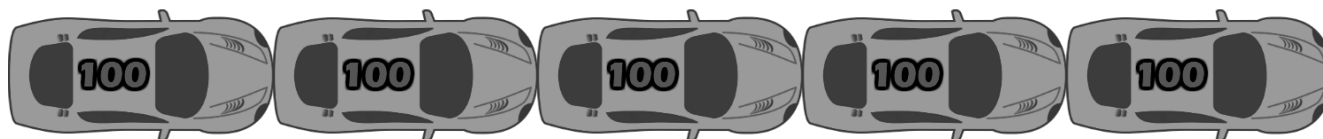
600

700

800

900

1000



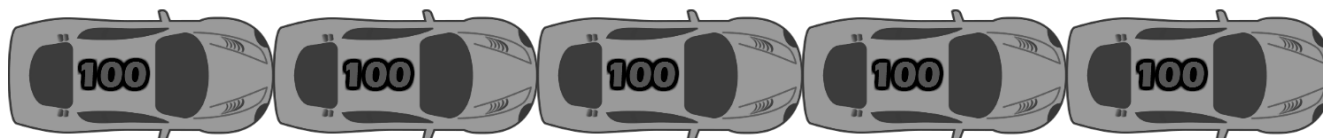
1100

1200

1300

1400

1500



1600

1700

1800

1900

2000



2100

2200

2300

2400

2500



2600

2700

2800

2900

3000

Counting by 100's (B)

Fill in the blanks.



100



900



1300

1400

1500



2000



2200

2400



Counting by 100's (B) Answers

Fill in the blanks.



100

200

300

400

500



600

700

800

900

1000



1100

1200

1300

1400

1500



1600

1700

1800

1900

2000



2100

2200

2300

2400

2500



2600

2700


2800

2900

3000

Counting by 100's (C)


Fill in the blanks.

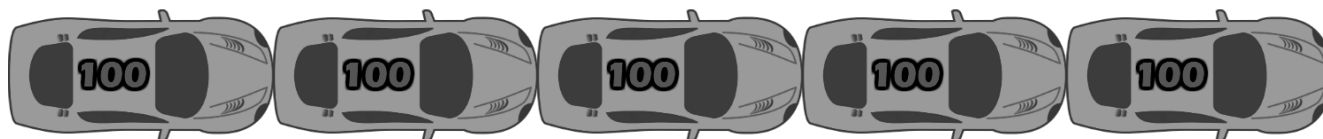


100

400

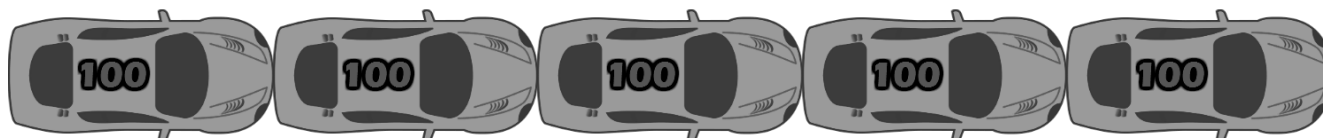
500





1200

1400



1700

1900

2000



2400

2500



2700

Counting by 100's (C) Answers

Fill in the blanks.



100

200

300

400

500



600

700

800

900

1000



1100

1200

1300

1400

1500



1600

1700

1800

1900

2000



2100

2200

2300

2400

2500



2600

2700

2800

2900

3000

Counting by 100's (D)

Fill in the blanks.



100

400

500



700



1400



1600



2200

2400



Counting by 100's (D) Answers

Fill in the blanks.



100

200

300

400

500



600

700

800

900

1000



1100

1200

1300

1400

1500



1600

1700

1800

1900

2000



2100

2200

2300

2400

2500



2600

2700

2800

2900

3000

Counting by 100's (E)

Fill in the blanks.



100



800





2000



2200

2300



2600

Counting by 100's (E) Answers

Fill in the blanks.



100

200

300

400

500



600

700

800

900

1000



1100

1200

1300

1400

1500



1600

1700

1800

1900

2000



2100

2200

2300

2400

2500



2600

2700

2800

2900

3000

Counting by 100's (F)

Fill in the blanks.



100

200

500





1200





2300



2800

Counting by 100's (F) Answers

Fill in the blanks.



100

200

300

400

500



600

700

800

900

1000



1100

1200

1300

1400

1500



1600

1700

1800

1900

2000



2100

2200

2300

2400

2500



2600

2700

2800

2900

3000

Counting by 100's (G)

Fill in the blanks.



100

200

300



900

1000



1100



1700

2000





3000

Counting by 100's (G) Answers

Fill in the blanks.




100

200

300

400

500



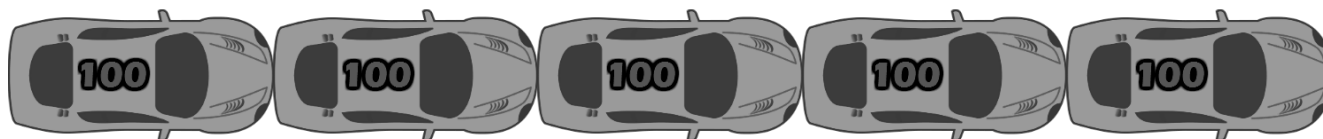
600

700

800

900

1000



1100

1200

1300

1400

1500



1600

1700

1800

1900

2000



2100

2200

2300

2400

2500



2600

2700

2800

2900

3000

Counting by 100's (H)

Fill in the blanks.



100

200



700



1200

1500



1600

1700

1900



2200

2400



Counting by 100's (H) Answers

Fill in the blanks.



100

200

300

400

500



600

700

800

900

1000



1100

1200

1300

1400

1500



1600

1700

1800

1900

2000



2100

2200

2300

2400

2500



2600

2700

2800

2900

3000

Images from Openclipart.org

Math-Drills.com

Counting by 100's (I)

Fill in the blanks.



100

200

500



600

900

1000



1300

1500







2700

Counting by 100's (I) Answers

Fill in the blanks.



100

200

300

400

500



600

700

800

900

1000



1100

1200

1300

1400

1500



1600

1700

1800

1900

2000



2100

2200

2300

2400

2500



2600

2700

2800

2900

3000

Counting by 100's (J)

Fill in the blanks.



100





1100

1200



1700

1900

2000





2900

Counting by 100's (J) Answers

Fill in the blanks.



100

200

300

400

500



600

700

800

900

1000



1100

1200

1300

1400

1500



1600

1700

1800

1900

2000



2100

2200

2300

2400

2500



2600

2700

2800

2900

3000