

Ten Frames (A)

Name: _____

Date: _____

Make a ten frame to represent each number.

10

9

8

7

6

5

4

3

2

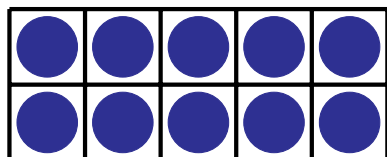
1

Ten Frames (A) Answers

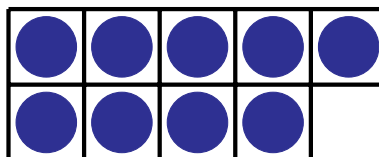
Name: _____

Date: _____

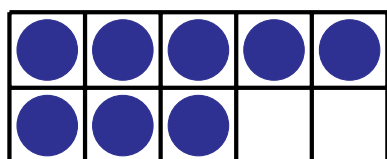
Make a ten frame to represent each number.



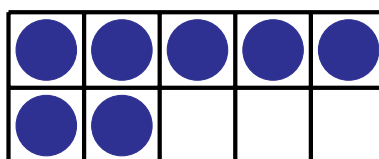
10



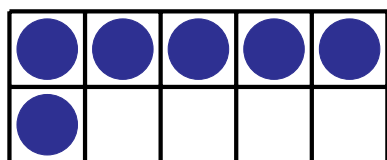
9



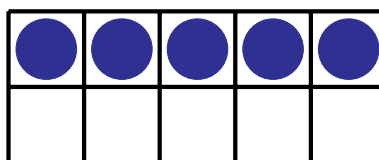
8



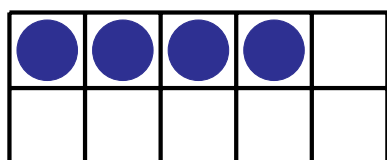
7



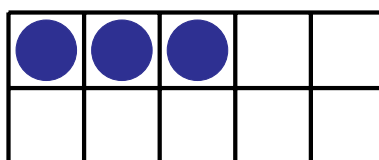
6



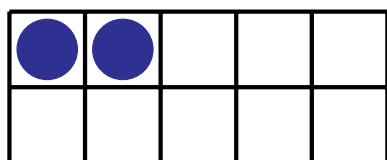
5



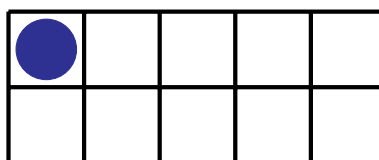
4



3



2



1