

Ten Frames (A)

Name: _____

Date: _____

Make a ten frame to represent each number.

1

2

3

4

5

6

7

8

9

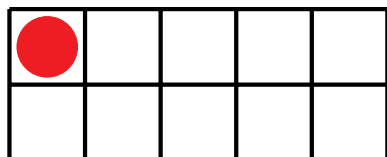
10

Ten Frames (A) Answers

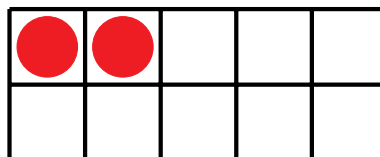
Name: _____

Date: _____

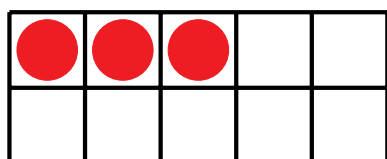
Make a ten frame to represent each number.



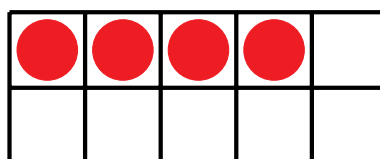
1



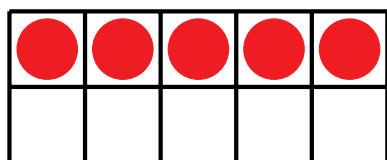
2



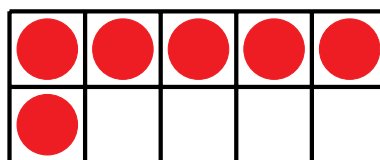
3



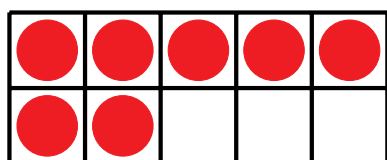
4



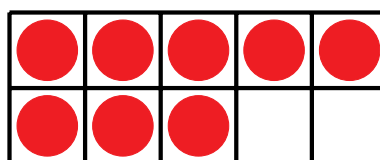
5




6




7



8



9



10