

Ten Frames (B)

Name: _____

Date: _____

Make a ten frame to represent each number.

2

7

5

10

8

3

6

4

9


1

Ten Frames (B) Answers

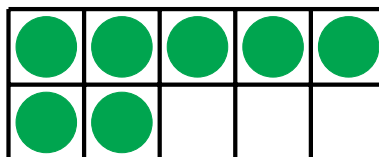
Name: _____

Date: _____

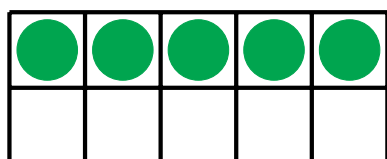
Make a ten frame to represent each number.




2



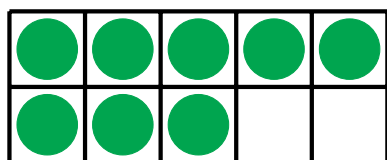
7



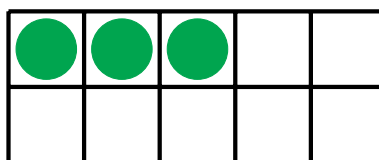
5



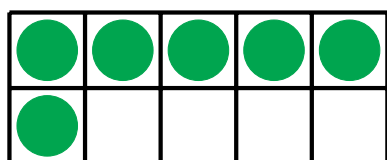
10



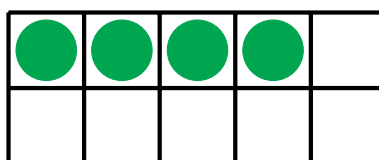
8




3



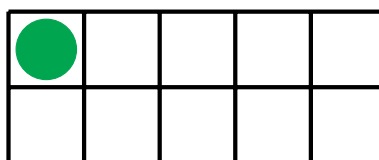
6



4



9



1