

Ten Frames (C)

Name: _____

Date: _____

Make a ten frame to represent each number.

9

10

5

4

2

1

6

3

7


8

Ten Frames (C) Answers


Name: _____

Date: _____

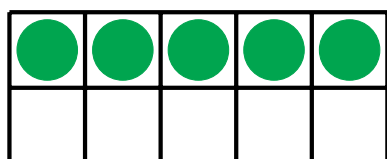
Make a ten frame to represent each number.



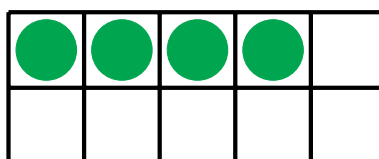
9



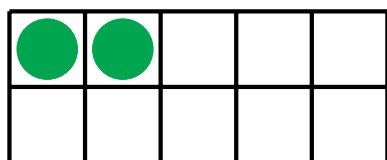
10



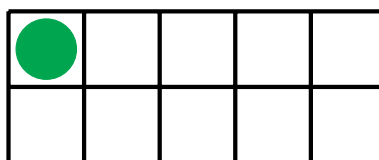
5



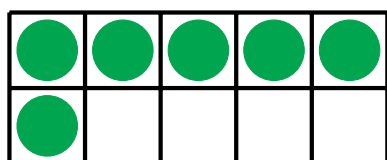
4



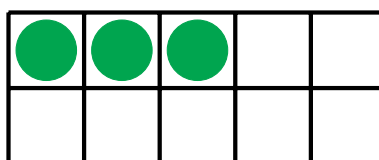
2



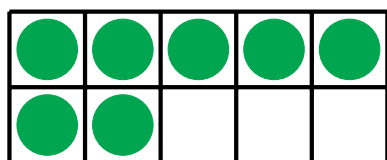
1



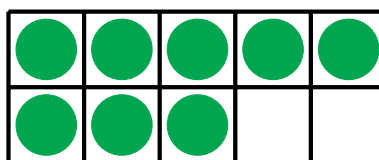
6



3



7



8