

Ten Frames (E)

Name: _____

Date: _____

Make a ten frame to represent each number.

8

2

3

6

5

7

9

4

1

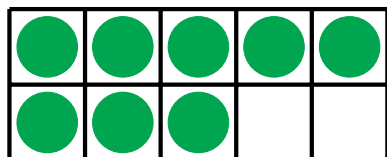
10

Ten Frames (E) Answers

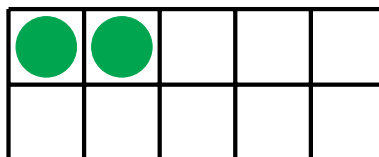
Name: _____

Date: _____

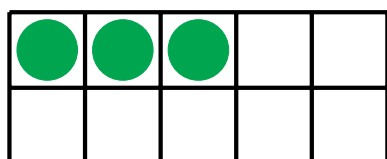
Make a ten frame to represent each number.



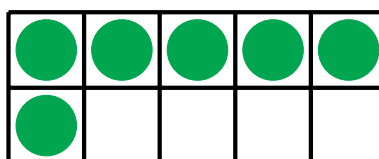
8



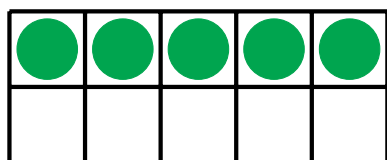
2



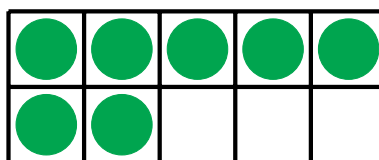
3




6



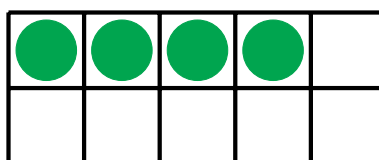
5



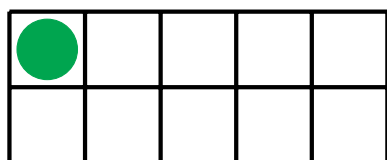
7




9



4



1



10