

Ten Frames (F)

Name: _____

Date: _____

Make a ten frame to represent each number.

4

5

9

7

3

8

10

1

2

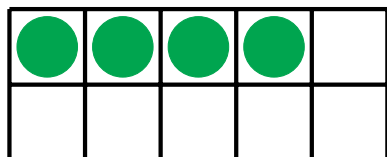
6

Ten Frames (F) Answers

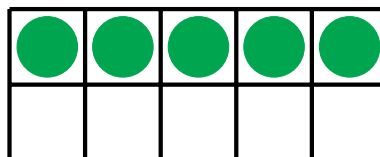
Name: _____

Date: _____


Make a ten frame to represent each number.



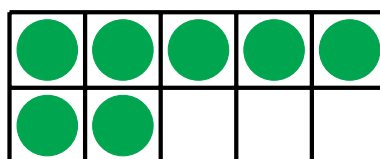
4



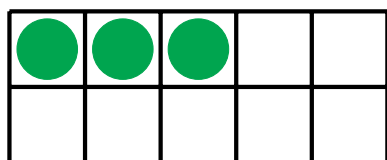
5



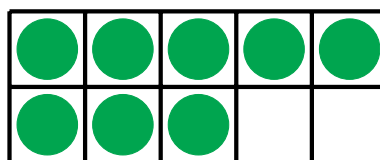
9




7



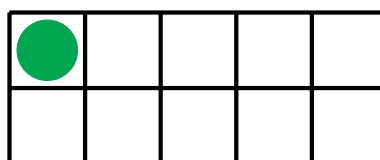
3



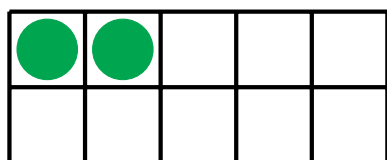
8



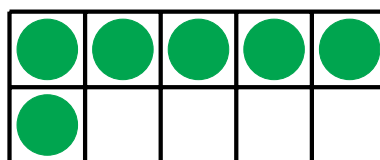
10



1



2



6