

Ten Frames (G)

Name: _____

Date: _____

Make a ten frame to represent each number.

2

7

10

8

1

3

4

5

9


6

Ten Frames (G) Answers

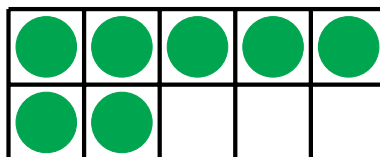
Name: _____

Date: _____


Make a ten frame to represent each number.



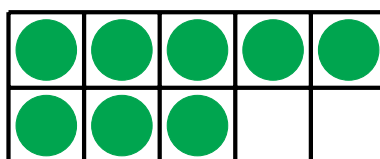
2



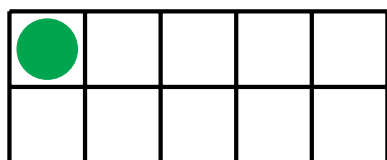
7



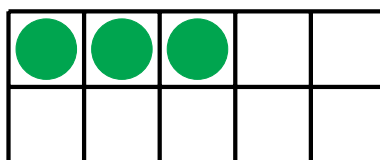
10



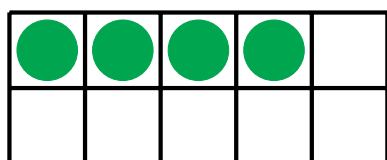
8



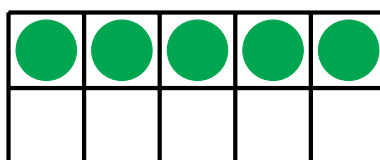
1




3



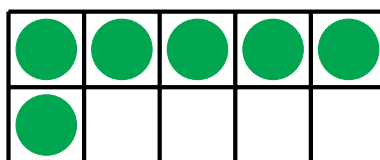
4



5



9



6