

Ten Frames (H)

Name: _____

Date: _____

Make a ten frame to represent each number.

| | | | | |
|--|--|--|--|--|
| | | | | |
| | | | | |

| |
|---|
| 9 |
|---|

| | | | | |
|--|--|--|--|--|
| | | | | |
| | | | | |

| |
|---|
| 5 |
|---|

| | | | | |
|--|--|--|--|--|
| | | | | |
| | | | | |

| |
|---|
| 4 |
|---|

| | | | | |
|--|--|--|--|--|
| | | | | |
| | | | | |

| |
|---|
| 8 |
|---|

| | | | | |
|--|--|--|--|--|
| | | | | |
| | | | | |

| |
|---|
| 2 |
|---|

| | | | | |
|--|--|--|--|--|
| | | | | |
| | | | | |

| |
|---|
| 3 |
|---|

| | | | | |
|--|--|--|--|--|
| | | | | |
| | | | | |

| |
|---|
| 6 |
|---|

| | | | | |
|--|--|--|--|--|
| | | | | |
| | | | | |

| |
|---|
| 7 |
|---|

| | | | | |
|--|--|--|--|--|
| | | | | |
| | | | | |

| |
|----|
| 10 |
|----|

| | | | | |
|--|--|--|--|--|
| | | | | |
| | | | | |


| |
|---|
| 1 |
|---|

Ten Frames (H) Answers

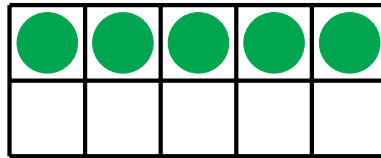
Name: _____

Date: _____

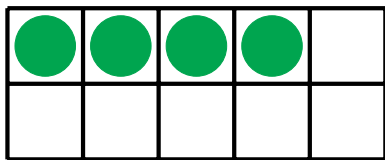
Make a ten frame to represent each number.




9



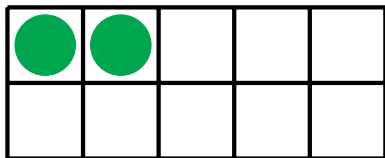
5



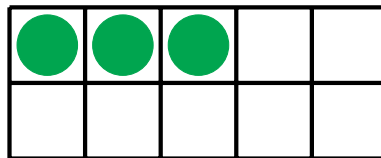
4



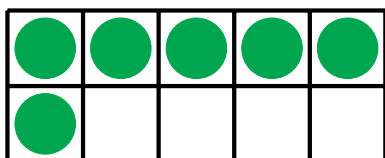
8



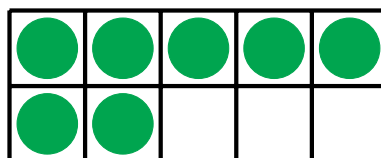
2




3



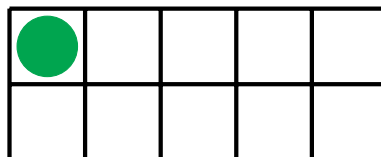
6



7



10



1