

# Ten Frames (I)

Name: \_\_\_\_\_

Date: \_\_\_\_\_

Make a ten frame to represent each number.


5
---


4
---


10
----


3
---


8
---


1
---


2
---


6
---


7
---

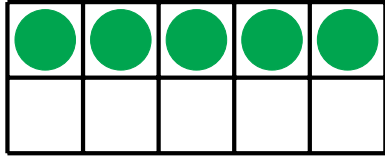

9
---

# Ten Frames (I) Answers

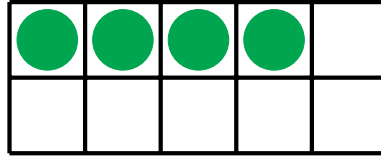
Name: \_\_\_\_\_

Date: \_\_\_\_\_


Make a ten frame to represent each number.



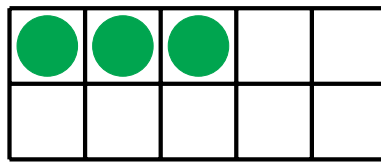
5




4



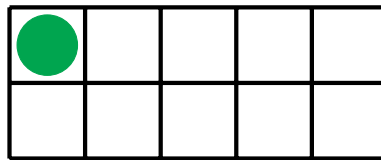
10



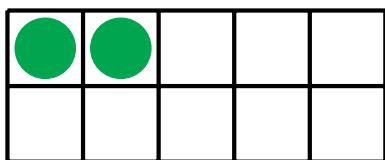
3



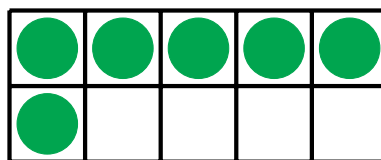
8



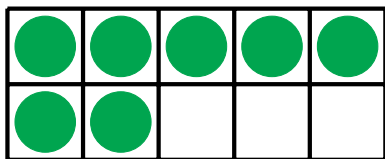
1




2



6



7



9