

# Ten Frames (J)

Name: \_\_\_\_\_

Date: \_\_\_\_\_

Make a ten frame to represent each number.


4
---


6
---


2
---


8
---


9
---


10
----


7
---


1
---


3
---

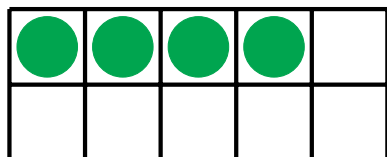

5
---

# Ten Frames (J) Answers

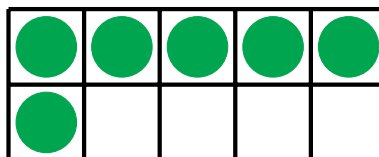
Name: \_\_\_\_\_

Date: \_\_\_\_\_

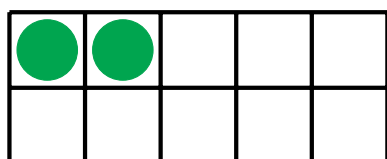
Make a ten frame to represent each number.



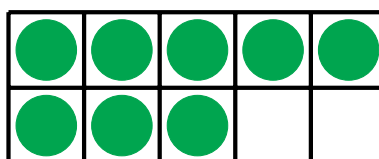
4




6




2



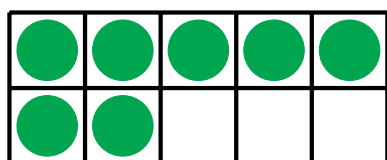
8



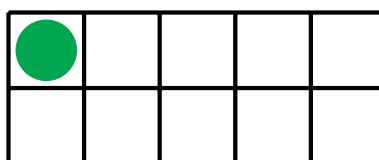
9



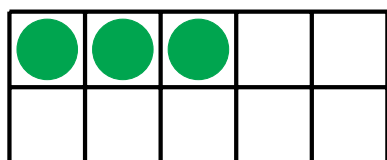
10



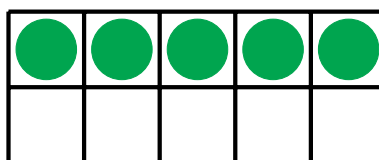
7



1



3



5