

Ten Frames (A)

Name: _____

Date: _____

Make a ten frame to represent each number.

4

10

2

1

8

3

7

5

9

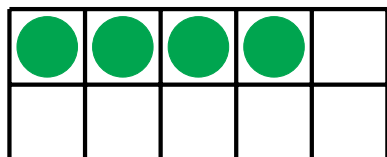
6

Ten Frames (A) Answers


Name: _____

Date: _____

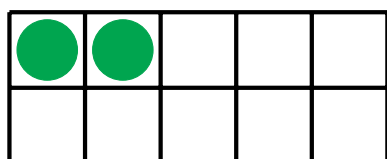
Make a ten frame to represent each number.



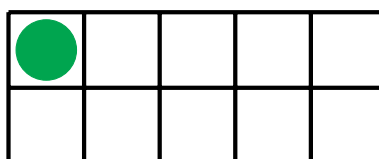
4



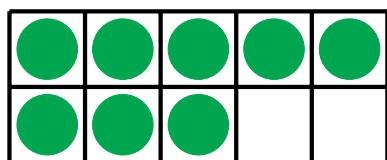
10



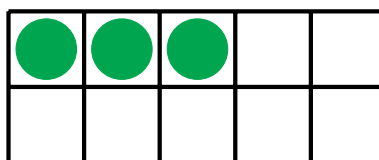
2



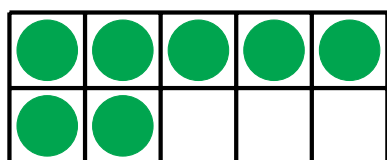
1



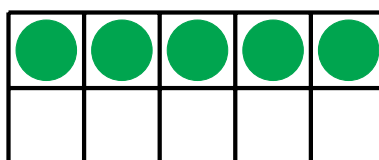
8




3



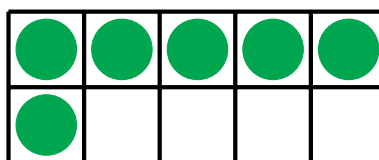
7



5



9



6

Ten Frames (B)

Name: _____

Date: _____

Make a ten frame to represent each number.

2

7

5

10

8

3

6

4

9


1

Ten Frames (B) Answers

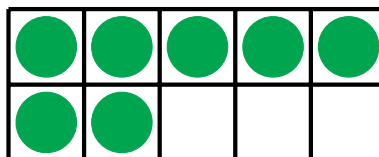
Name: _____

Date: _____

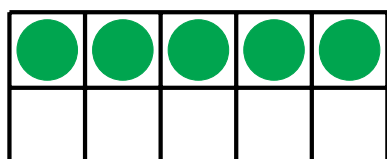
Make a ten frame to represent each number.




2



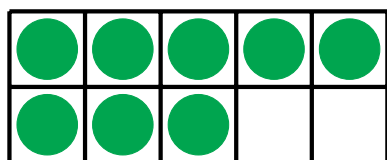
7



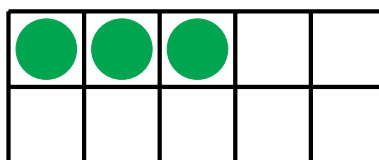
5



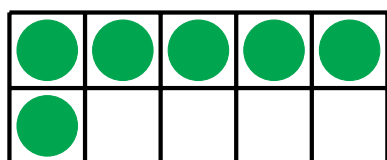
10



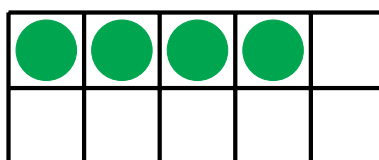
8




3



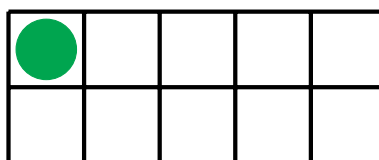
6



4



9



1

Ten Frames (C)

Name: _____

Date: _____

Make a ten frame to represent each number.

9

10

5

4

2

1

6

3

7


8

Ten Frames (C) Answers


Name: _____

Date: _____

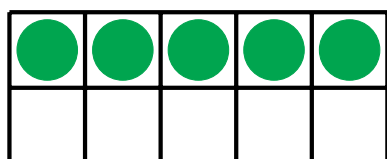
Make a ten frame to represent each number.



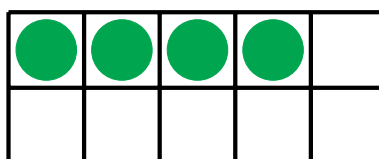
9



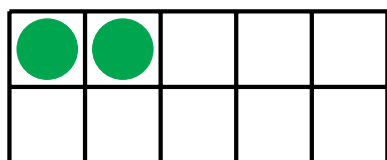
10



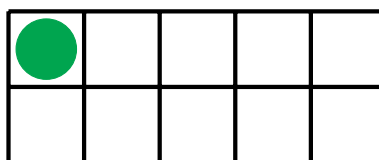
5



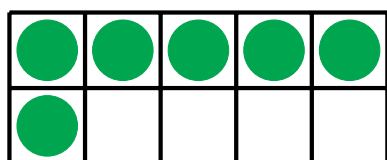
4



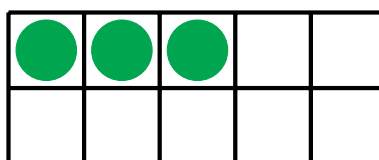
2



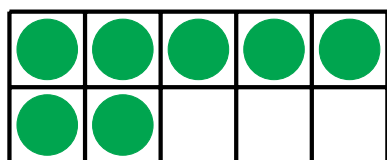
1



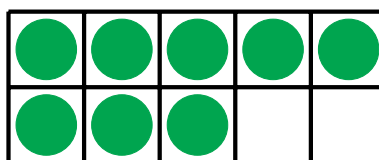
6



3



7



8

Ten Frames (D)

Name: _____

Date: _____

Make a ten frame to represent each number.

1

9

10

2

8

6

5

3

4

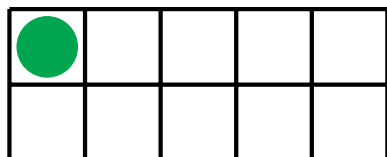
7

Ten Frames (D) Answers


Name: _____

Date: _____


Make a ten frame to represent each number.



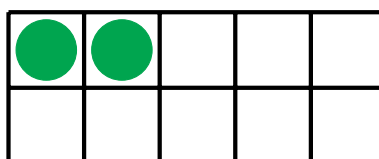
1



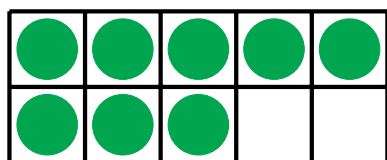
9



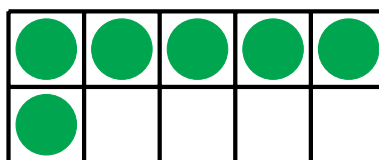
10



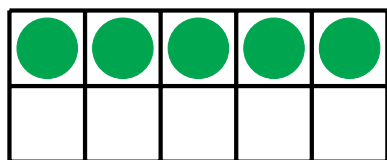
2



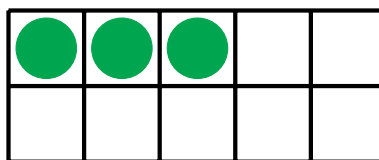
8



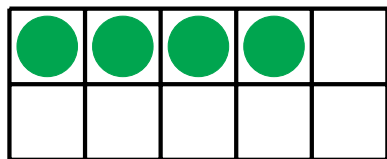
6



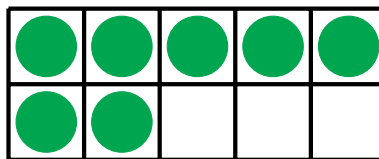
5



3



4



7

Ten Frames (E)

Name: _____

Date: _____

Make a ten frame to represent each number.

8

2

3

6

5

7

9

4

1

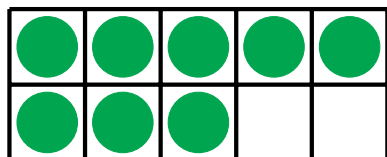
10

Ten Frames (E) Answers

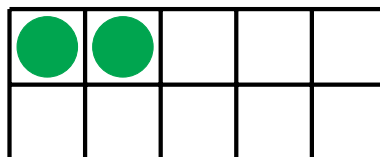
Name: _____

Date: _____

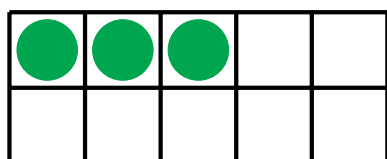
Make a ten frame to represent each number.



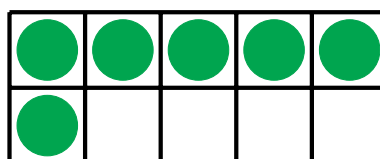
8



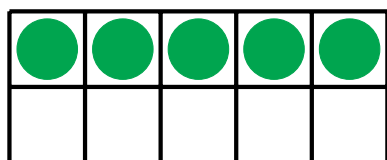
2



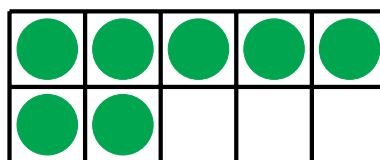
3




6



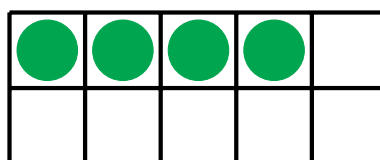
5



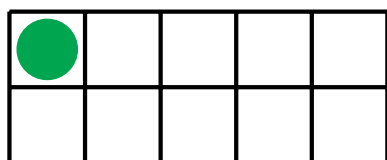
7




9



4



1



10

Ten Frames (F)

Name: _____

Date: _____

Make a ten frame to represent each number.

4

5

9

7

3

8

10

1

2

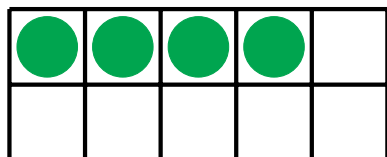
6

Ten Frames (F) Answers

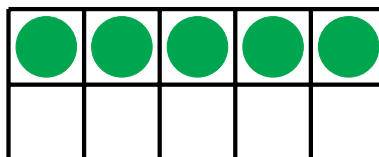
Name: _____

Date: _____


Make a ten frame to represent each number.



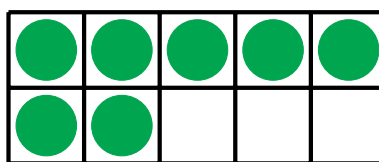
4



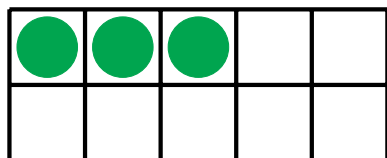
5



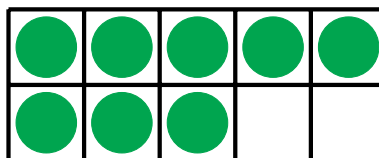
9




7



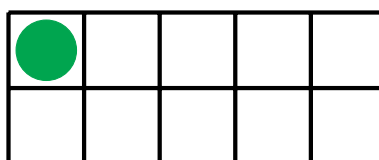
3



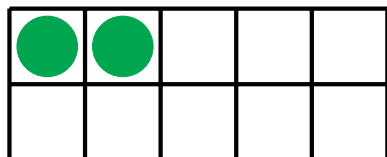
8



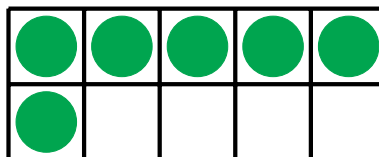
10



1



2



6

Ten Frames (G)

Name: _____

Date: _____

Make a ten frame to represent each number.

2

7

10

8

1

3

4

5

9


6

Ten Frames (G) Answers

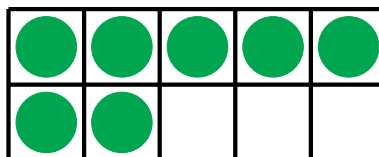
Name: _____

Date: _____


Make a ten frame to represent each number.



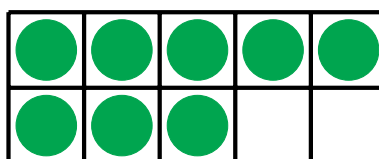
2



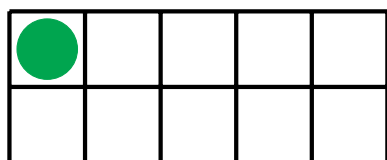
7



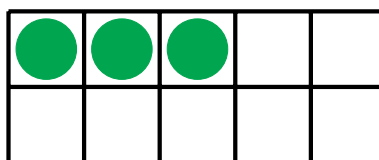
10



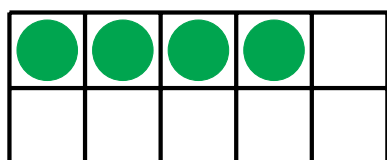
8



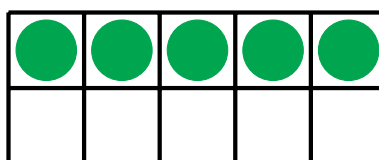
1




3



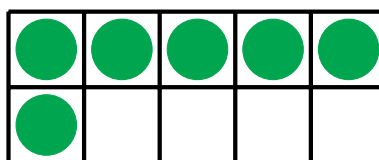
4



5



9



6

Ten Frames (H)

Name: _____

Date: _____

Make a ten frame to represent each number.

9

5

4

8

2

3

6

7

10


1

Ten Frames (H) Answers

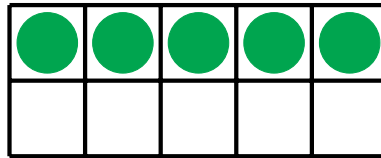
Name: _____

Date: _____

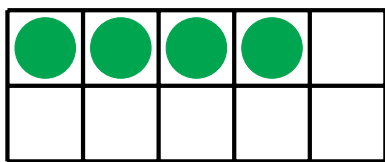
Make a ten frame to represent each number.



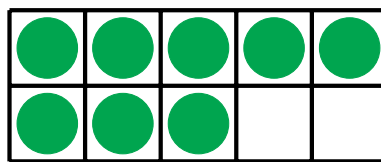
9



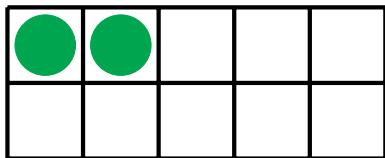
5



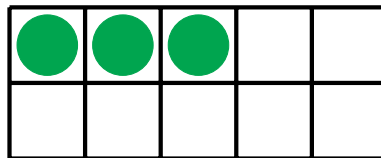
4



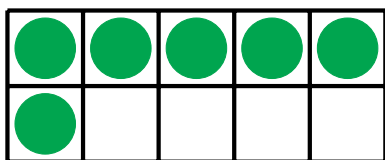
8



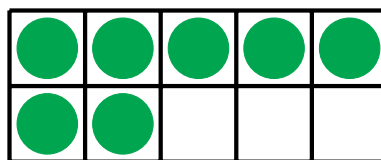
2




3



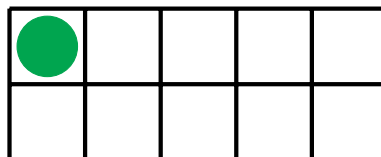
6



7



10



1

Ten Frames (I)

Name: _____

Date: _____

Make a ten frame to represent each number.

5

4

10

3

8

1

2

6

7

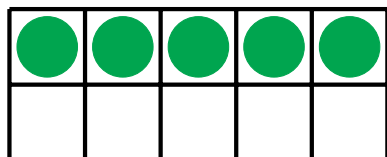
9

Ten Frames (I) Answers

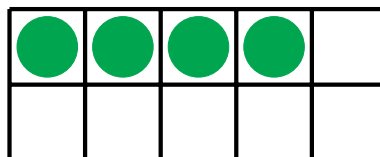
Name: _____

Date: _____


Make a ten frame to represent each number.



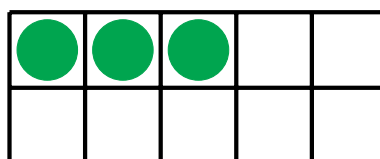
5



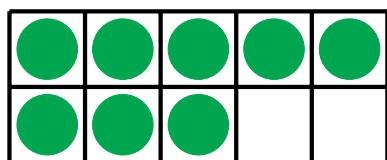
4



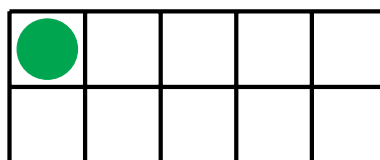
10



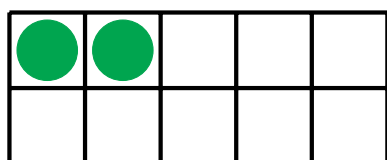
3



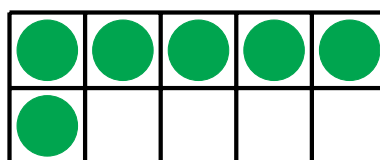
8



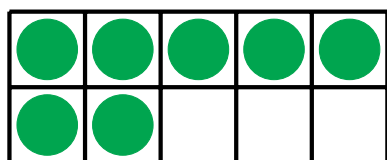
1




2



6



7



9

Ten Frames (J)

Name: _____

Date: _____

Make a ten frame to represent each number.

4

6

2

8

9

10

7

1

3

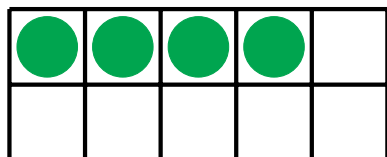
5

Ten Frames (J) Answers

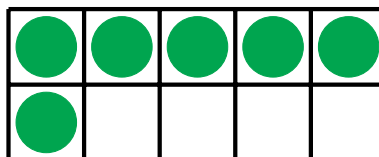
Name: _____

Date: _____

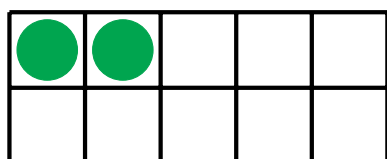
Make a ten frame to represent each number.



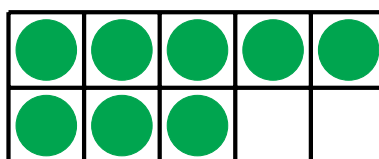
4




6




2



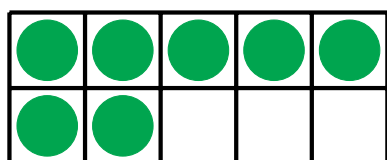
8



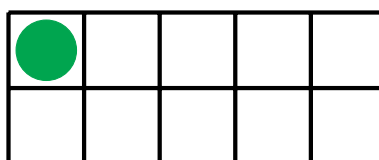
9



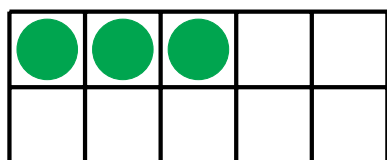
10



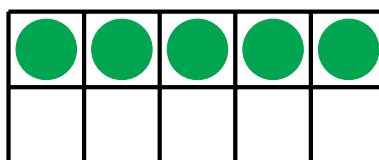
7



1



3



5