

Number Patterns (A)

Name: _____

Date: _____

Identify, continue and describe each number pattern.

1. ← — — — — — — — — — →

2. ← — — — — — — — — — →

3. ← — — — — — — — — — →

4. ← — — — — — — — — — →

5. ← — — — — — — — — — →

6. ← — — — — — — — — — →

7. ← — — — — — — — — — →

8. ← — — — — — — — — — →

9. ← — — — — — — — — — →

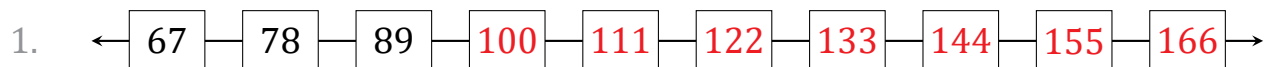
10. ← — — — — — — — — — →

Number Patterns (A) Answers

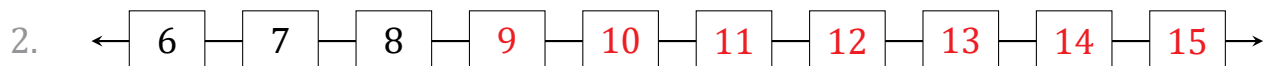
Name: _____

Date: _____

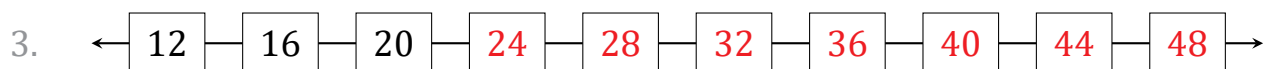
Identify, continue and describe each number pattern.



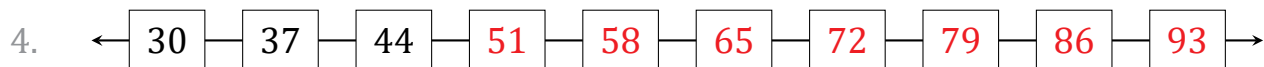
Start at 67 and add 11 each time.



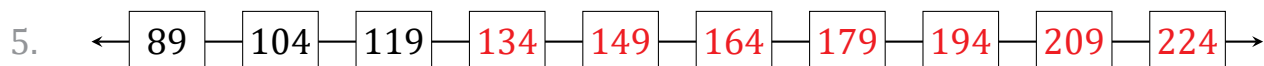
Start at 6 and add 1 each time.



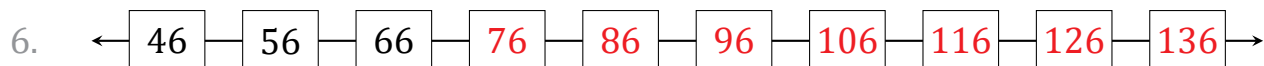
Start at 12 and add 4 each time.



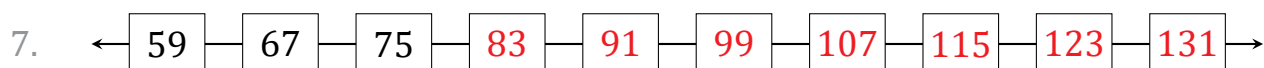
Start at 30 and add 7 each time.



Start at 89 and add 15 each time.



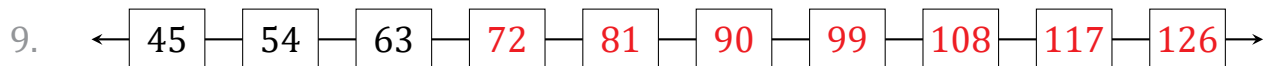
Start at 46 and add 10 each time.



Start at 59 and add 8 each time.



Start at 23 and add 12 each time.



Start at 45 and add 9 each time.



Start at 97 and add 100 each time.