

Number Patterns (J)

Name: _____

Date: _____

Identify, continue and describe each number pattern.

1. ←

1	2	3							
---	---	---	--	--	--	--	--	--	--

 →

2. ←

40	42	44							
----	----	----	--	--	--	--	--	--	--

 →

3. ←

17	26	35							
----	----	----	--	--	--	--	--	--	--

 →

4. ←

93	98	103							
----	----	-----	--	--	--	--	--	--	--

 →

5. ←

27	39	51							
----	----	----	--	--	--	--	--	--	--

 →

6. ←

62	72	82							
----	----	----	--	--	--	--	--	--	--

 →

7. ←

83	86	89							
----	----	----	--	--	--	--	--	--	--

 →

8. ←

36	61	86							
----	----	----	--	--	--	--	--	--	--

 →

9. ←

50	56	62							
----	----	----	--	--	--	--	--	--	--

 →

10. ←

70	85	100							
----	----	-----	--	--	--	--	--	--	--

 →

Number Patterns (J) Answers

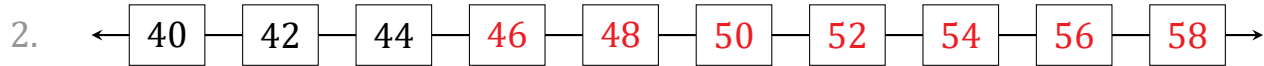
Name: _____

Date: _____

Identify, continue and describe each number pattern.



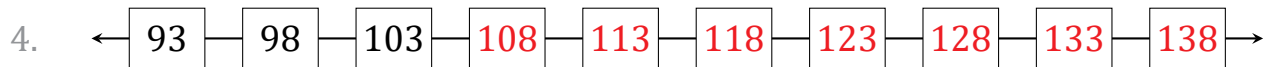
Start at 1 and add 1 each time.



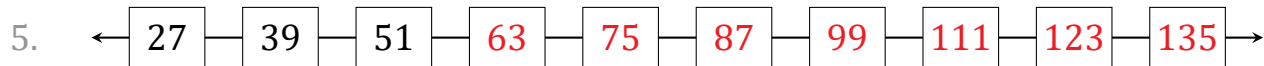
Start at 40 and add 2 each time.



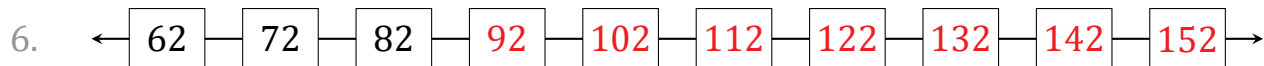
Start at 17 and add 9 each time.



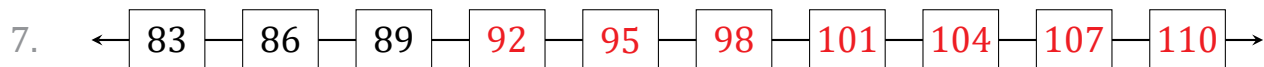
Start at 93 and add 5 each time.



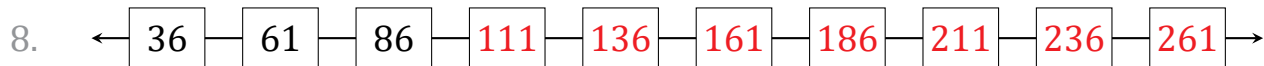
Start at 27 and add 12 each time.



Start at 62 and add 10 each time.



Start at 83 and add 3 each time.



Start at 36 and add 25 each time.



Start at 50 and add 6 each time.



Start at 70 and add 15 each time.