

Number Patterns (A)

Name: _____

Date: _____

Identify, continue and describe each number pattern.

1. ← 67 — 78 — 89 — — — — — — — →

2. ← 6 — 7 — 8 — — — — — — — →

3. ← 12 — 16 — 20 — — — — — — — →

4. ← 30 — 37 — 44 — — — — — — — →

5. ← 89 — 104 — 119 — — — — — — — →

6. ← 46 — 56 — 66 — — — — — — — →

7. ← 59 — 67 — 75 — — — — — — — →

8. ← 23 — 35 — 47 — — — — — — — →

9. ← 45 — 54 — 63 — — — — — — — →

10. ← 97 — 197 — 297 — — — — — — — →

Number Patterns (A) Answers

Name: _____

Date: _____

Identify, continue and describe each number pattern.

1. ← 67 — 78 — 89 — 100 — 111 — 122 — 133 — 144 — 155 — 166 →

Start at 67 and add 11 each time.

2. ← 6 — 7 — 8 — 9 — 10 — 11 — 12 — 13 — 14 — 15 →

Start at 6 and add 1 each time.

3. ← 12 — 16 — 20 — 24 — 28 — 32 — 36 — 40 — 44 — 48 →

Start at 12 and add 4 each time.

4. ← 30 — 37 — 44 — 51 — 58 — 65 — 72 — 79 — 86 — 93 →

Start at 30 and add 7 each time.

5. ← 89 — 104 — 119 — 134 — 149 — 164 — 179 — 194 — 209 — 224 →

Start at 89 and add 15 each time.

6. ← 46 — 56 — 66 — 76 — 86 — 96 — 106 — 116 — 126 — 136 →

Start at 46 and add 10 each time.

7. ← 59 — 67 — 75 — 83 — 91 — 99 — 107 — 115 — 123 — 131 →

Start at 59 and add 8 each time.

8. ← 23 — 35 — 47 — 59 — 71 — 83 — 95 — 107 — 119 — 131 →

Start at 23 and add 12 each time.

9. ← 45 — 54 — 63 — 72 — 81 — 90 — 99 — 108 — 117 — 126 →

Start at 45 and add 9 each time.

10. ← 97 — 197 — 297 — 397 — 497 — 597 — 697 — 797 — 897 — 997 →

Start at 97 and add 100 each time.

Number Patterns (B)

Name: _____

Date: _____

Identify, continue and describe each number pattern.

1. ← 68 — 79 — 90 — — — — — — — →

2. ← 97 — 147 — 197 — — — — — — — →

3. ← 43 — 48 — 53 — — — — — — — →

4. ← 59 — 74 — 89 — — — — — — — →

5. ← 81 — 82 — 83 — — — — — — — →

6. ← 9 — 21 — 33 — — — — — — — →

7. ← 25 — 33 — 41 — — — — — — — →

8. ← 34 — 37 — 40 — — — — — — — →

9. ← 84 — 90 — 96 — — — — — — — →

10. ← 11 — 15 — 19 — — — — — — — →

Number Patterns (B) Answers

Name: _____

Date: _____

Identify, continue and describe each number pattern.

1. ← 68 — 79 — 90 — 101 — 112 — 123 — 134 — 145 — 156 — 167 →

Start at 68 and add 11 each time.

2. ← 97 — 147 — 197 — 247 — 297 — 347 — 397 — 447 — 497 — 547 →

Start at 97 and add 50 each time.

3. ← 43 — 48 — 53 — 58 — 63 — 68 — 73 — 78 — 83 — 88 →

Start at 43 and add 5 each time.

4. ← 59 — 74 — 89 — 104 — 119 — 134 — 149 — 164 — 179 — 194 →

Start at 59 and add 15 each time.

5. ← 81 — 82 — 83 — 84 — 85 — 86 — 87 — 88 — 89 — 90 →

Start at 81 and add 1 each time.

6. ← 9 — 21 — 33 — 45 — 57 — 69 — 81 — 93 — 105 — 117 →

Start at 9 and add 12 each time.

7. ← 25 — 33 — 41 — 49 — 57 — 65 — 73 — 81 — 89 — 97 →

Start at 25 and add 8 each time.

8. ← 34 — 37 — 40 — 43 — 46 — 49 — 52 — 55 — 58 — 61 →

Start at 34 and add 3 each time.

9. ← 84 — 90 — 96 — 102 — 108 — 114 — 120 — 126 — 132 — 138 →

Start at 84 and add 6 each time.

10. ← 11 — 15 — 19 — 23 — 27 — 31 — 35 — 39 — 43 — 47 →

Start at 11 and add 4 each time.

Number Patterns (C)

Name: _____

Date: _____

Identify, continue and describe each number pattern.

1. ← — — — — — — — — — →

2. ← — — — — — — — — — →

3. ← — — — — — — — — — →

4. ← — — — — — — — — — →

5. ← — — — — — — — — — →

6. ← — — — — — — — — — →

7. ← — — — — — — — — — →

8. ← — — — — — — — — — →

9. ← — — — — — — — — — →

10. ← — — — — — — — — — →

Number Patterns (C) Answers

Name: _____

Date: _____

Identify, continue and describe each number pattern.

1. ← 87 — 92 — 97 — 102 — 107 — 112 — 117 — 122 — 127 — 132 →

Start at 87 and add 5 each time.

2. ← 47 — 58 — 69 — 80 — 91 — 102 — 113 — 124 — 135 — 146 →

Start at 47 and add 11 each time.

3. ← 95 — 98 — 101 — 104 — 107 — 110 — 113 — 116 — 119 — 122 →

Start at 95 and add 3 each time.

4. ← 3 — 11 — 19 — 27 — 35 — 43 — 51 — 59 — 67 — 75 →

Start at 3 and add 8 each time.

5. ← 68 — 93 — 118 — 143 — 168 — 193 — 218 — 243 — 268 — 293 →

Start at 68 and add 25 each time.

6. ← 12 — 24 — 36 — 48 — 60 — 72 — 84 — 96 — 108 — 120 →

Start at 12 and add 12 each time.

7. ← 63 — 163 — 263 — 363 — 463 — 563 — 663 — 763 — 863 — 963 →

Start at 63 and add 100 each time.

8. ← 79 — 83 — 87 — 91 — 95 — 99 — 103 — 107 — 111 — 115 →

Start at 79 and add 4 each time.

9. ← 45 — 46 — 47 — 48 — 49 — 50 — 51 — 52 — 53 — 54 →

Start at 45 and add 1 each time.

10. ← 26 — 32 — 38 — 44 — 50 — 56 — 62 — 68 — 74 — 80 →

Start at 26 and add 6 each time.

Number Patterns (D)

Name: _____

Date: _____

Identify, continue and describe each number pattern.

1. ← 49 — 64 — 79 — — — — — — — →

2. ← 68 — 80 — 92 — — — — — — — →

3. ← 85 — 95 — 105 — — — — — — — →

4. ← 96 — 99 — 102 — — — — — — — →

5. ← 5 — 14 — 23 — — — — — — — →

6. ← 30 — 41 — 52 — — — — — — — →

7. ← 62 — 69 — 76 — — — — — — — →

8. ← 26 — 30 — 34 — — — — — — — →

9. ← 79 — 81 — 83 — — — — — — — →

10. ← 13 — 63 — 113 — — — — — — — →

Number Patterns (D) Answers

Name: _____

Date: _____

Identify, continue and describe each number pattern.



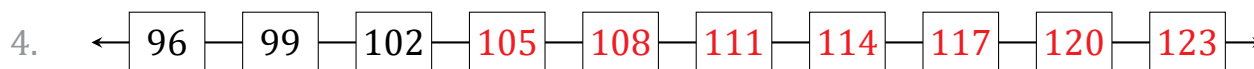
Start at 49 and add 15 each time.



Start at 68 and add 12 each time.



Start at 85 and add 10 each time.



Start at 96 and add 3 each time.



Start at 5 and add 9 each time.



Start at 30 and add 11 each time.



Start at 62 and add 7 each time.



Start at 26 and add 4 each time.



Start at 79 and add 2 each time.



Start at 13 and add 50 each time.

Number Patterns (E)

Name: _____

Date: _____

Identify, continue and describe each number pattern.

1. ← 39 — 89 — 139 — — — — — — — →

2. ← 32 — 38 — 44 — — — — — — — →

3. ← 21 — 32 — 43 — — — — — — — →

4. ← 51 — 55 — 59 — — — — — — — →

5. ← 68 — 78 — 88 — — — — — — — →

6. ← 18 — 20 — 22 — — — — — — — →

7. ← 56 — 71 — 86 — — — — — — — →

8. ← 8 — 11 — 14 — — — — — — — →

9. ← 84 — 85 — 86 — — — — — — — →

10. ← 97 — 104 — 111 — — — — — — — →

Number Patterns (E) Answers

Name: _____

Date: _____

Identify, continue and describe each number pattern.

1. ← 39 — 89 — 139 — 189 — 239 — 289 — 339 — 389 — 439 — 489 →

Start at 39 and add 50 each time.

2. ← 32 — 38 — 44 — 50 — 56 — 62 — 68 — 74 — 80 — 86 →

Start at 32 and add 6 each time.

3. ← 21 — 32 — 43 — 54 — 65 — 76 — 87 — 98 — 109 — 120 →

Start at 21 and add 11 each time.

4. ← 51 — 55 — 59 — 63 — 67 — 71 — 75 — 79 — 83 — 87 →

Start at 51 and add 4 each time.

5. ← 68 — 78 — 88 — 98 — 108 — 118 — 128 — 138 — 148 — 158 →

Start at 68 and add 10 each time.

6. ← 18 — 20 — 22 — 24 — 26 — 28 — 30 — 32 — 34 — 36 →

Start at 18 and add 2 each time.

7. ← 56 — 71 — 86 — 101 — 116 — 131 — 146 — 161 — 176 — 191 →

Start at 56 and add 15 each time.

8. ← 8 — 11 — 14 — 17 — 20 — 23 — 26 — 29 — 32 — 35 →

Start at 8 and add 3 each time.

9. ← 84 — 85 — 86 — 87 — 88 — 89 — 90 — 91 — 92 — 93 →

Start at 84 and add 1 each time.

10. ← 97 — 104 — 111 — 118 — 125 — 132 — 139 — 146 — 153 — 160 →

Start at 97 and add 7 each time.

Number Patterns (F)

Name: _____

Date: _____

Identify, continue and describe each number pattern.

1. ← — — — — — — — — — →

2. ← — — — — — — — — — →

3. ← — — — — — — — — — →

4. ← — — — — — — — — — →

5. ← — — — — — — — — — →

6. ← — — — — — — — — — →

7. ← — — — — — — — — — →

8. ← — — — — — — — — — →

9. ← — — — — — — — — — →

10. ← — — — — — — — — — →

Number Patterns (F) Answers

Name: _____

Date: _____

Identify, continue and describe each number pattern.

1. ← 60 — 64 — 68 — 72 — 76 — 80 — 84 — 88 — 92 — 96 →

Start at 60 and add 4 each time.

2. ← 83 — 95 — 107 — 119 — 131 — 143 — 155 — 167 — 179 — 191 →

Start at 83 and add 12 each time.

3. ← 80 — 85 — 90 — 95 — 100 — 105 — 110 — 115 — 120 — 125 →

Start at 80 and add 5 each time.

4. ← 70 — 170 — 270 — 370 — 470 — 570 — 670 — 770 — 870 — 970 →

Start at 70 and add 100 each time.

5. ← 23 — 48 — 73 — 98 — 123 — 148 — 173 — 198 — 223 — 248 →

Start at 23 and add 25 each time.

6. ← 41 — 42 — 43 — 44 — 45 — 46 — 47 — 48 — 49 — 50 →

Start at 41 and add 1 each time.

7. ← 50 — 100 — 150 — 200 — 250 — 300 — 350 — 400 — 450 — 500 →

Start at 50 and add 50 each time.

8. ← 94 — 103 — 112 — 121 — 130 — 139 — 148 — 157 — 166 — 175 →

Start at 94 and add 9 each time.

9. ← 36 — 47 — 58 — 69 — 80 — 91 — 102 — 113 — 124 — 135 →

Start at 36 and add 11 each time.

10. ← 5 — 15 — 25 — 35 — 45 — 55 — 65 — 75 — 85 — 95 →

Start at 5 and add 10 each time.

Number Patterns (G)

Name: _____

Date: _____

Identify, continue and describe each number pattern.

1. ← — — — — — — — — — →

2. ← — — — — — — — — — →

3. ← — — — — — — — — — →

4. ← — — — — — — — — — →

5. ← — — — — — — — — — →

6. ← — — — — — — — — — →

7. ← — — — — — — — — — →

8. ← — — — — — — — — — →

9. ← — — — — — — — — — →

10. ← — — — — — — — — — →

Number Patterns (G) Answers

Name: _____

Date: _____

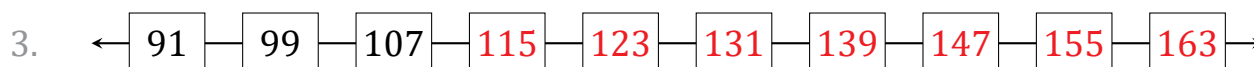
Identify, continue and describe each number pattern.



Start at 37 and add 7 each time.



Start at 46 and add 100 each time.



Start at 91 and add 8 each time.



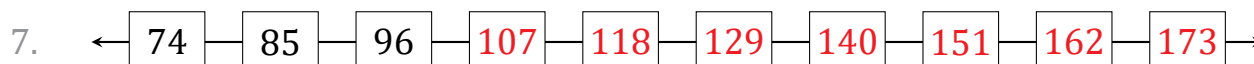
Start at 34 and add 25 each time.



Start at 3 and add 1 each time.



Start at 90 and add 4 each time.



Start at 74 and add 11 each time.



Start at 24 and add 6 each time.



Start at 10 and add 10 each time.



Start at 58 and add 9 each time.

Number Patterns (H)

Name: _____

Date: _____

Identify, continue and describe each number pattern.

1. ← 13 — 22 — 31 — — — — — — — →

2. ← 87 — 99 — 111 — — — — — — — →

3. ← 73 — 79 — 85 — — — — — — — →

4. ← 25 — 27 — 29 — — — — — — — →

5. ← 97 — 108 — 119 — — — — — — — →

6. ← 53 — 68 — 83 — — — — — — — →

7. ← 4 — 29 — 54 — — — — — — — →

8. ← 34 — 44 — 54 — — — — — — — →

9. ← 38 — 41 — 44 — — — — — — — →

10. ← 59 — 64 — 69 — — — — — — — →

Number Patterns (H) Answers

Name: _____

Date: _____

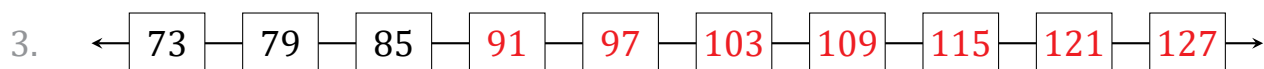
Identify, continue and describe each number pattern.



Start at 13 and add 9 each time.



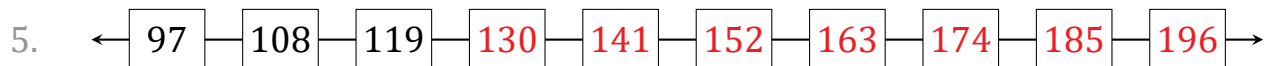
Start at 87 and add 12 each time.



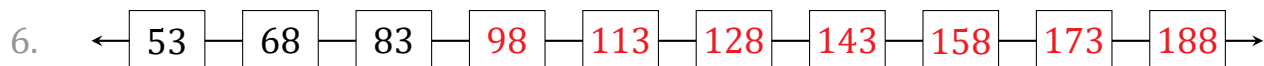
Start at 73 and add 6 each time.



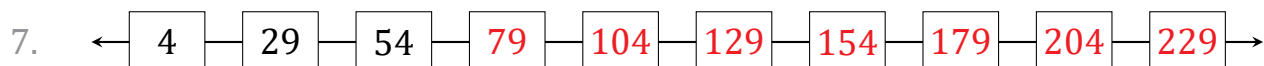
Start at 25 and add 2 each time.



Start at 97 and add 11 each time.



Start at 53 and add 15 each time.



Start at 4 and add 25 each time.



Start at 34 and add 10 each time.



Start at 38 and add 3 each time.



Start at 59 and add 5 each time.

Number Patterns (I)

Name: _____

Date: _____

Identify, continue and describe each number pattern.

1. ← 21 — 22 — 23 — — — — — — — →

2. ← 43 — 54 — 65 — — — — — — — →

3. ← 36 — 42 — 48 — — — — — — — →

4. ← 15 — 22 — 29 — — — — — — — →

5. ← 9 — 34 — 59 — — — — — — — →

6. ← 83 — 91 — 99 — — — — — — — →

7. ← 93 — 103 — 113 — — — — — — — →

8. ← 73 — 173 — 273 — — — — — — — →

9. ← 53 — 103 — 153 — — — — — — — →

10. ← 67 — 69 — 71 — — — — — — — →

Number Patterns (I) Answers

Name: _____

Date: _____

Identify, continue and describe each number pattern.

1. ← 21 — 22 — 23 — 24 — 25 — 26 — 27 — 28 — 29 — 30 →

Start at 21 and add 1 each time.

2. ← 43 — 54 — 65 — 76 — 87 — 98 — 109 — 120 — 131 — 142 →

Start at 43 and add 11 each time.

3. ← 36 — 42 — 48 — 54 — 60 — 66 — 72 — 78 — 84 — 90 →

Start at 36 and add 6 each time.

4. ← 15 — 22 — 29 — 36 — 43 — 50 — 57 — 64 — 71 — 78 →

Start at 15 and add 7 each time.

5. ← 9 — 34 — 59 — 84 — 109 — 134 — 159 — 184 — 209 — 234 →

Start at 9 and add 25 each time.

6. ← 83 — 91 — 99 — 107 — 115 — 123 — 131 — 139 — 147 — 155 →

Start at 83 and add 8 each time.

7. ← 93 — 103 — 113 — 123 — 133 — 143 — 153 — 163 — 173 — 183 →

Start at 93 and add 10 each time.

8. ← 73 — 173 — 273 — 373 — 473 — 573 — 673 — 773 — 873 — 973 →

Start at 73 and add 100 each time.

9. ← 53 — 103 — 153 — 203 — 253 — 303 — 353 — 403 — 453 — 503 →

Start at 53 and add 50 each time.

10. ← 67 — 69 — 71 — 73 — 75 — 77 — 79 — 81 — 83 — 85 →

Start at 67 and add 2 each time.

Number Patterns (J)

Name: _____

Date: _____

Identify, continue and describe each number pattern.

1. ←

1	2	3							
---	---	---	--	--	--	--	--	--	--

 →

2. ←

40	42	44							
----	----	----	--	--	--	--	--	--	--

 →

3. ←

17	26	35							
----	----	----	--	--	--	--	--	--	--

 →

4. ←

93	98	103							
----	----	-----	--	--	--	--	--	--	--

 →

5. ←

27	39	51							
----	----	----	--	--	--	--	--	--	--

 →

6. ←

62	72	82							
----	----	----	--	--	--	--	--	--	--

 →

7. ←

83	86	89							
----	----	----	--	--	--	--	--	--	--

 →

8. ←

36	61	86							
----	----	----	--	--	--	--	--	--	--

 →

9. ←

50	56	62							
----	----	----	--	--	--	--	--	--	--

 →

10. ←

70	85	100							
----	----	-----	--	--	--	--	--	--	--

 →

Number Patterns (J) Answers

Name: _____

Date: _____

Identify, continue and describe each number pattern.



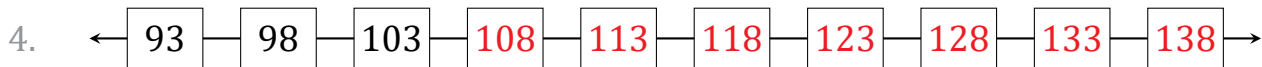
Start at 1 and add 1 each time.



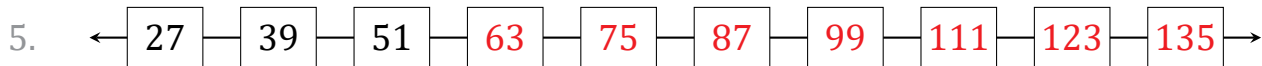
Start at 40 and add 2 each time.



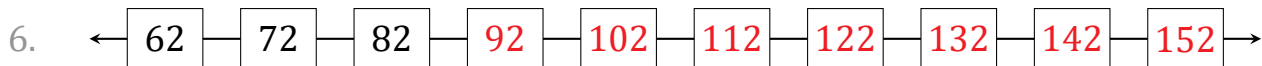
Start at 17 and add 9 each time.



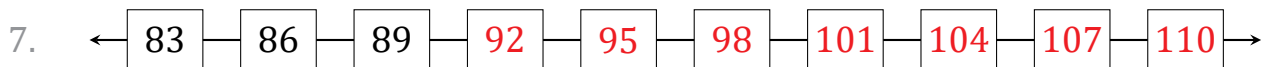
Start at 93 and add 5 each time.



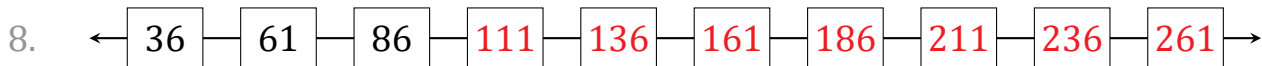
Start at 27 and add 12 each time.



Start at 62 and add 10 each time.



Start at 83 and add 3 each time.



Start at 36 and add 25 each time.



Start at 50 and add 6 each time.



Start at 70 and add 15 each time.