

# Number Patterns (A)

Name: \_\_\_\_\_

Date: \_\_\_\_\_

Identify, complete and describe each number pattern.

1.  $\leftarrow$   — 285 —  —  —  — 185 —  —  — 110 —   $\rightarrow$

2.  $\leftarrow$   — 38 —  —  — 65 — 74 —  —  —  —   $\rightarrow$

3.  $\leftarrow$   — 36 —  —  —  —  — 26 —  — 22 —   $\rightarrow$

4.  $\leftarrow$   — 67 —  —  —  — 107 —  — 127 —  —   $\rightarrow$

5.  $\leftarrow$  111 —  — 103 —  —  —  —  —  — 79 —   $\rightarrow$

6.  $\leftarrow$   —  —  — 155 — 205 — 255 —  —  —  —   $\rightarrow$

7.  $\leftarrow$   —  —  — 77 —  —  —  — 53 — 47 —   $\rightarrow$

8.  $\leftarrow$  69 —  — 99 — 114 —  —  —  —  —  —   $\rightarrow$

9.  $\leftarrow$   —  — 45 —  —  —  —  — 20 —  — 10  $\rightarrow$

10.  $\leftarrow$   —  — 109 — 117 —  —  —  —  —  — 165  $\rightarrow$

# Number Patterns (A) Answers

Name: \_\_\_\_\_

Date: \_\_\_\_\_

Identify, complete and describe each number pattern.

1. ← 310 — 285 — 260 — 235 — 210 — 185 — 160 — 135 — 110 — 85 →

Start at 310 and subtract 25 each time.

2. ← 29 — 38 — 47 — 56 — 65 — 74 — 83 — 92 — 101 — 110 →

Start at 29 and add 9 each time.

3. ← 38 — 36 — 34 — 32 — 30 — 28 — 26 — 24 — 22 — 20 →

Start at 38 and subtract 2 each time.

4. ← 57 — 67 — 77 — 87 — 97 — 107 — 117 — 127 — 137 — 147 →

Start at 57 and add 10 each time.

5. ← 111 — 107 — 103 — 99 — 95 — 91 — 87 — 83 — 79 — 75 →

Start at 111 and subtract 4 each time.

6. ← 5 — 55 — 105 — 155 — 205 — 255 — 305 — 355 — 405 — 455 →

Start at 5 and add 50 each time.

7. ← 95 — 89 — 83 — 77 — 71 — 65 — 59 — 53 — 47 — 41 →

Start at 95 and subtract 6 each time.

8. ← 69 — 84 — 99 — 114 — 129 — 144 — 159 — 174 — 189 — 204 →

Start at 69 and add 15 each time.

9. ← 55 — 50 — 45 — 40 — 35 — 30 — 25 — 20 — 15 — 10 →

Start at 55 and subtract 5 each time.

10. ← 93 — 101 — 109 — 117 — 125 — 133 — 141 — 149 — 157 — 165 →

Start at 93 and add 8 each time.

# Number Patterns (B)

Name: \_\_\_\_\_

Date: \_\_\_\_\_

Identify, complete and describe each number pattern.

1.  $\leftarrow$              $\rightarrow$

2.  $\leftarrow$             $\rightarrow$

3.  $\leftarrow$             $\rightarrow$

4.  $\leftarrow$             $\rightarrow$

5.  $\leftarrow$             $\rightarrow$

6.  $\leftarrow$             $\rightarrow$

7.  $\leftarrow$             $\rightarrow$

8.  $\leftarrow$             $\rightarrow$

9.  $\leftarrow$             $\rightarrow$

10.  $\leftarrow$             $\rightarrow$

# Number Patterns (B) Answers

Name: \_\_\_\_\_

Date: \_\_\_\_\_

Identify, complete and describe each number pattern.

1. ← 141 — 129 — 117 — 105 — 93 — 81 — 69 — 57 — 45 — 33 →

Start at 141 and subtract 12 each time.

2. ← 19 — 21 — 23 — 25 — 27 — 29 — 31 — 33 — 35 — 37 →

Start at 19 and add 2 each time.

3. ← 184 — 169 — 154 — 139 — 124 — 109 — 94 — 79 — 64 — 49 →

Start at 184 and subtract 15 each time.

4. ← 9 — 17 — 25 — 33 — 41 — 49 — 57 — 65 — 73 — 81 →

Start at 9 and add 8 each time.

5. ← 160 — 150 — 140 — 130 — 120 — 110 — 100 — 90 — 80 — 70 →

Start at 160 and subtract 10 each time.

6. ← 86 — 95 — 104 — 113 — 122 — 131 — 140 — 149 — 158 — 167 →

Start at 86 and add 9 each time.

7. ← 53 — 52 — 51 — 50 — 49 — 48 — 47 — 46 — 45 — 44 →

Start at 53 and subtract 1 each time.

8. ← 80 — 87 — 94 — 101 — 108 — 115 — 122 — 129 — 136 — 143 →

Start at 80 and add 7 each time.

9. ← 83 — 80 — 77 — 74 — 71 — 68 — 65 — 62 — 59 — 56 →

Start at 83 and subtract 3 each time.

10. ← 13 — 19 — 25 — 31 — 37 — 43 — 49 — 55 — 61 — 67 →

Start at 13 and add 6 each time.

# Number Patterns (C)

Name: \_\_\_\_\_

Date: \_\_\_\_\_

Identify, complete and describe each number pattern.

1.  $\leftarrow$   —  — 82 — 76 —  —  —  — 52 —  —   $\rightarrow$

2.  $\leftarrow$   —  — 115 —  — 131 —  —  —  —  —  — 171  $\rightarrow$

3.  $\leftarrow$   — 486 — 436 —  —  —  — 236 —  —  —   $\rightarrow$

4.  $\leftarrow$  18 —  — 40 —  —  — 73 —  —  —  —   $\rightarrow$

5.  $\leftarrow$   —  —  —  — 77 —  —  — 68 — 65 —   $\rightarrow$

6.  $\leftarrow$  26 —  —  — 29 —  —  —  —  —  —  — 35  $\rightarrow$

7.  $\leftarrow$   —  —  —  —  — 82 — 80 — 78 —  —   $\rightarrow$

8.  $\leftarrow$   — 59 —  —  —  —  —  — 209 —  — 259  $\rightarrow$

9.  $\leftarrow$   —  —  —  — 101 — 94 —  —  —  —  — 66  $\rightarrow$

10.  $\leftarrow$   — 16 —  —  —  —  —  —  —  — 100 — 112  $\rightarrow$

# Number Patterns (C) Answers

Name: \_\_\_\_\_

Date: \_\_\_\_\_

Identify, complete and describe each number pattern.

1. ← 94 — 88 — 82 — 76 — 70 — 64 — 58 — 52 — 46 — 40 →

Start at 94 and subtract 6 each time.

2. ← 99 — 107 — 115 — 123 — 131 — 139 — 147 — 155 — 163 — 171 →

Start at 99 and add 8 each time.

3. ← 536 — 486 — 436 — 386 — 336 — 286 — 236 — 186 — 136 — 86 →

Start at 536 and subtract 50 each time.

4. ← 18 — 29 — 40 — 51 — 62 — 73 — 84 — 95 — 106 — 117 →

Start at 18 and add 11 each time.

5. ← 89 — 86 — 83 — 80 — 77 — 74 — 71 — 68 — 65 — 62 →

Start at 89 and subtract 3 each time.

6. ← 26 — 27 — 28 — 29 — 30 — 31 — 32 — 33 — 34 — 35 →

Start at 26 and add 1 each time.

7. ← 92 — 90 — 88 — 86 — 84 — 82 — 80 — 78 — 76 — 74 →

Start at 92 and subtract 2 each time.

8. ← 34 — 59 — 84 — 109 — 134 — 159 — 184 — 209 — 234 — 259 →

Start at 34 and add 25 each time.

9. ← 129 — 122 — 115 — 108 — 101 — 94 — 87 — 80 — 73 — 66 →

Start at 129 and subtract 7 each time.

10. ← 4 — 16 — 28 — 40 — 52 — 64 — 76 — 88 — 100 — 112 →

Start at 4 and add 12 each time.

# Number Patterns (D)

Name: \_\_\_\_\_

Date: \_\_\_\_\_

Identify, complete and describe each number pattern.

1. ←  —  — 91 —  —  — 88 —  —  —  — 84 →

2. ←  —  —  —  —  —  — 124 — 132 — 140 —  →

3. ←  —  — 170 —  —  —  — 126 —  —  — 93 →

4. ← 57 —  — 157 —  —  —  —  — 407 —  —  →

5. ← 105 —  —  —  — 77 —  —  —  — 49 —  →

6. ←  —  —  — 123 —  —  —  —  — 248 — 273 →

7. ←  — 81 —  —  —  —  —  — 21 —  — 1 →

8. ←  —  — 95 —  — 119 —  —  —  —  — 179 →

9. ← 922 —  —  — 622 —  —  —  —  — 122 —  →

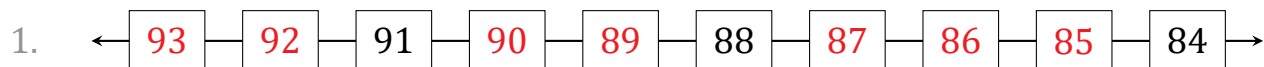
10. ←  —  —  —  —  —  — 44 — 46 —  — 50 →

# Number Patterns (D) Answers

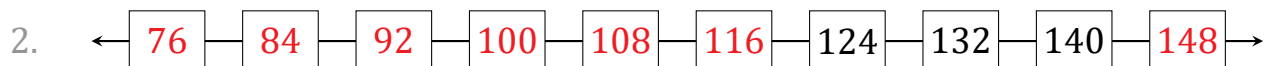
Name: \_\_\_\_\_

Date: \_\_\_\_\_

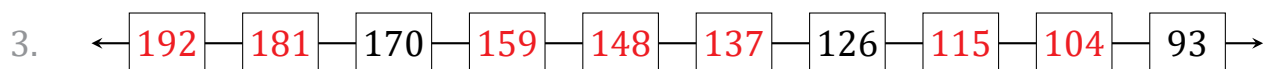
Identify, complete and describe each number pattern.



Start at 93 and subtract 1 each time.



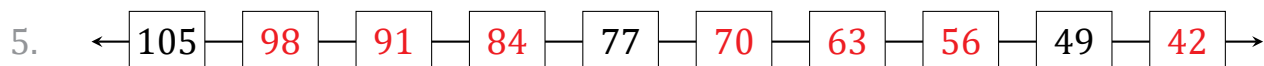
Start at 76 and add 8 each time.



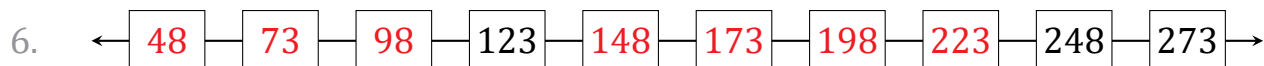
Start at 192 and subtract 11 each time.



Start at 57 and add 50 each time.



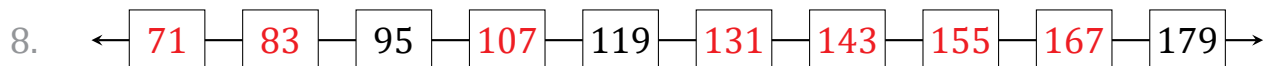
Start at 105 and subtract 7 each time.



Start at 48 and add 25 each time.



Start at 91 and subtract 10 each time.



Start at 71 and add 12 each time.



Start at 922 and subtract 100 each time.



Start at 32 and add 2 each time.



# Number Patterns (E)

Name: \_\_\_\_\_

Date: \_\_\_\_\_

Identify, complete and describe each number pattern.

1. ←  —  —  —  —  —  — 243 — 193 — 143 —  →

2. ← 37 —  — 39 — 40 —  —  —  —  —  —  →

3. ←  —  — 124 —  —  —  — 104 —  — 94 —  →

4. ← 55 —  —  —  —  — 75 —  —  —  — 91 →

5. ← 85 —  —  —  — 53 — 45 —  —  —  —  →

6. ←  —  —  —  — 45 — 54 —  — 72 —  —  →

7. ← 144 —  —  —  —  — 109 — 102 —  —  —  →

8. ← 34 — 44 — 54 —  —  —  —  —  —  —  →

9. ←  —  —  —  —  — 68 — 57 — 46 —  —  →

10. ←  — 72 —  —  —  —  — 197 —  — 247 —  →

# Number Patterns (E) Answers

Name: \_\_\_\_\_

Date: \_\_\_\_\_

Identify, complete and describe each number pattern.

1. ← 543 — 493 — 443 — 393 — 343 — 293 — 243 — 193 — 143 — 93 →

Start at 543 and subtract 50 each time.

2. ← 37 — 38 — 39 — 40 — 41 — 42 — 43 — 44 — 45 — 46 →

Start at 37 and add 1 each time.

3. ← 134 — 129 — 124 — 119 — 114 — 109 — 104 — 99 — 94 — 89 →

Start at 134 and subtract 5 each time.

4. ← 55 — 59 — 63 — 67 — 71 — 75 — 79 — 83 — 87 — 91 →

Start at 55 and add 4 each time.

5. ← 85 — 77 — 69 — 61 — 53 — 45 — 37 — 29 — 21 — 13 →

Start at 85 and subtract 8 each time.

6. ← 9 — 18 — 27 — 36 — 45 — 54 — 63 — 72 — 81 — 90 →

Start at 9 and add 9 each time.

7. ← 144 — 137 — 130 — 123 — 116 — 109 — 102 — 95 — 88 — 81 →

Start at 144 and subtract 7 each time.

8. ← 34 — 44 — 54 — 64 — 74 — 84 — 94 — 104 — 114 — 124 →

Start at 34 and add 10 each time.

9. ← 123 — 112 — 101 — 90 — 79 — 68 — 57 — 46 — 35 — 24 →

Start at 123 and subtract 11 each time.

10. ← 47 — 72 — 97 — 122 — 147 — 172 — 197 — 222 — 247 — 272 →

Start at 47 and add 25 each time.

# Number Patterns (F)

Name: \_\_\_\_\_

Date: \_\_\_\_\_

Identify, complete and describe each number pattern.

1.  $\leftarrow$   —  — 118 — 112 —  —  —  —  — 82 —   $\rightarrow$

2.  $\leftarrow$   —  —  —  — 17 —  — 23 — 26 —  —   $\rightarrow$

3.  $\leftarrow$   — 111 —  —  — 96 —  —  —  —  — 71  $\rightarrow$

4.  $\leftarrow$  10 — 17 —  —  —  — 45 —  —  —  —   $\rightarrow$

5.  $\leftarrow$  488 —  —  —  —  —  —  —  — 88 — 38  $\rightarrow$

6.  $\leftarrow$   — 124 —  —  —  — 524 —  —  —  — 924  $\rightarrow$

7.  $\leftarrow$   — 74 —  —  —  —  — 64 — 62 —  —   $\rightarrow$

8.  $\leftarrow$   — 36 —  —  —  —  — 56 — 60 —  —   $\rightarrow$

9.  $\leftarrow$  192 —  — 170 — 159 —  —  —  —  —  —   $\rightarrow$

10.  $\leftarrow$   —  —  —  —  — 179 —  — 229 — 254 —   $\rightarrow$

# Number Patterns (F) Answers

Name: \_\_\_\_\_

Date: \_\_\_\_\_

Identify, complete and describe each number pattern.

1. ← 130 — 124 — 118 — 112 — 106 — 100 — 94 — 88 — 82 — 76 →

Start at 130 and subtract 6 each time.

2. ← 5 — 8 — 11 — 14 — 17 — 20 — 23 — 26 — 29 — 32 →

Start at 5 and add 3 each time.

3. ← 116 — 111 — 106 — 101 — 96 — 91 — 86 — 81 — 76 — 71 →

Start at 116 and subtract 5 each time.

4. ← 10 — 17 — 24 — 31 — 38 — 45 — 52 — 59 — 66 — 73 →

Start at 10 and add 7 each time.

5. ← 488 — 438 — 388 — 338 — 288 — 238 — 188 — 138 — 88 — 38 →

Start at 488 and subtract 50 each time.

6. ← 24 — 124 — 224 — 324 — 424 — 524 — 624 — 724 — 824 — 924 →

Start at 24 and add 100 each time.

7. ← 76 — 74 — 72 — 70 — 68 — 66 — 64 — 62 — 60 — 58 →

Start at 76 and subtract 2 each time.

8. ← 32 — 36 — 40 — 44 — 48 — 52 — 56 — 60 — 64 — 68 →

Start at 32 and add 4 each time.

9. ← 192 — 181 — 170 — 159 — 148 — 137 — 126 — 115 — 104 — 93 →

Start at 192 and subtract 11 each time.

10. ← 54 — 79 — 104 — 129 — 154 — 179 — 204 — 229 — 254 — 279 →

Start at 54 and add 25 each time.

# Number Patterns (G)

Name: \_\_\_\_\_

Date: \_\_\_\_\_

Identify, complete and describe each number pattern.

1. ←  —  —  —  —  — 116 — 108 — 100 —  —  →

2. ←  33 —  —  —  —  —  —  —  — 153 — 168 →

3. ←  66 —  —  —  — 58 — 56 —  —  —  —  →

4. ←  —  —  —  — 40 —  —  —  — 60 — 65 →

5. ←  —  — 83 —  — 63 —  —  —  — 23 —  →

6. ←  —  — 141 —  — 191 — 216 —  —  —  —  →

7. ←  163 — 152 — 141 —  —  —  —  —  —  —  →

8. ←  3 —  —  —  —  —  —  — 24 — 27 —  →

9. ←  956 — 856 —  —  —  —  —  —  — 156 —  →

10. ←  45 — 52 —  — 66 —  —  —  —  —  —  →

# Number Patterns (G) Answers

Name: \_\_\_\_\_

Date: \_\_\_\_\_

Identify, complete and describe each number pattern.

1. ← 156 — 148 — 140 — 132 — 124 — 116 — 108 — 100 — 92 — 84 →

Start at 156 and subtract 8 each time.

2. ← 33 — 48 — 63 — 78 — 93 — 108 — 123 — 138 — 153 — 168 →

Start at 33 and add 15 each time.

3. ← 66 — 64 — 62 — 60 — 58 — 56 — 54 — 52 — 50 — 48 →

Start at 66 and subtract 2 each time.

4. ← 20 — 25 — 30 — 35 — 40 — 45 — 50 — 55 — 60 — 65 →

Start at 20 and add 5 each time.

5. ← 103 — 93 — 83 — 73 — 63 — 53 — 43 — 33 — 23 — 13 →

Start at 103 and subtract 10 each time.

6. ← 91 — 116 — 141 — 166 — 191 — 216 — 241 — 266 — 291 — 316 →

Start at 91 and add 25 each time.

7. ← 163 — 152 — 141 — 130 — 119 — 108 — 97 — 86 — 75 — 64 →

Start at 163 and subtract 11 each time.

8. ← 3 — 6 — 9 — 12 — 15 — 18 — 21 — 24 — 27 — 30 →

Start at 3 and add 3 each time.

9. ← 956 — 856 — 756 — 656 — 556 — 456 — 356 — 256 — 156 — 56 →

Start at 956 and subtract 100 each time.

10. ← 45 — 52 — 59 — 66 — 73 — 80 — 87 — 94 — 101 — 108 →

Start at 45 and add 7 each time.

# Number Patterns (H)

Name: \_\_\_\_\_

Date: \_\_\_\_\_

Identify, complete and describe each number pattern.

1.  $\leftarrow$      101   83 77   $\rightarrow$

2.  $\leftarrow$   106    138    170  $\rightarrow$

3.  $\leftarrow$    91     71 67   $\rightarrow$

4.  $\leftarrow$        31  37 40  $\rightarrow$

5.  $\leftarrow$        119 104  74  $\rightarrow$

6.  $\leftarrow$  82 91  109        $\rightarrow$

7.  $\leftarrow$   92  70  48      $\rightarrow$

8.  $\leftarrow$    47 52  62      $\rightarrow$

9.  $\leftarrow$  29     24   21   $\rightarrow$

10.  $\leftarrow$  33   69       141  $\rightarrow$

# Number Patterns (H) Answers

Name: \_\_\_\_\_

Date: \_\_\_\_\_

Identify, complete and describe each number pattern.

1. ← 125 — 119 — 113 — 107 — 101 — 95 — 89 — 83 — 77 — 71 →

Start at 125 and subtract 6 each time.

2. ← 98 — 106 — 114 — 122 — 130 — 138 — 146 — 154 — 162 — 170 →

Start at 98 and add 8 each time.

3. ← 99 — 95 — 91 — 87 — 83 — 79 — 75 — 71 — 67 — 63 →

Start at 99 and subtract 4 each time.

4. ← 13 — 16 — 19 — 22 — 25 — 28 — 31 — 34 — 37 — 40 →

Start at 13 and add 3 each time.

5. ← 209 — 194 — 179 — 164 — 149 — 134 — 119 — 104 — 89 — 74 →

Start at 209 and subtract 15 each time.

6. ← 82 — 91 — 100 — 109 — 118 — 127 — 136 — 145 — 154 — 163 →

Start at 82 and add 9 each time.

7. ← 103 — 92 — 81 — 70 — 59 — 48 — 37 — 26 — 15 — 4 →

Start at 103 and subtract 11 each time.

8. ← 37 — 42 — 47 — 52 — 57 — 62 — 67 — 72 — 77 — 82 →

Start at 37 and add 5 each time.

9. ← 29 — 28 — 27 — 26 — 25 — 24 — 23 — 22 — 21 — 20 →

Start at 29 and subtract 1 each time.

10. ← 33 — 45 — 57 — 69 — 81 — 93 — 105 — 117 — 129 — 141 →

Start at 33 and add 12 each time.



# Number Patterns (I)

Name: \_\_\_\_\_

Date: \_\_\_\_\_

Identify, complete and describe each number pattern.

1. ←  — 177 —  —  — 144 —  —  —  —  — 89 →

2. ←  67        123 131  →

3. ←  935    635     235   →

4. ←      135   159  183 →

5. ←   75 68     33  →

6. ←  47  77      152   →

7. ←    19 16     1 →

8. ←        101 102 103 →

9. ←  105  100  90       →

10. ←    39  57    84  →

# Number Patterns (I) Answers

Name: \_\_\_\_\_

Date: \_\_\_\_\_

Identify, complete and describe each number pattern.

1. ← 188 — 177 — 166 — 155 — 144 — 133 — 122 — 111 — 100 — 89 →

Start at 188 and subtract 11 each time.

2. ← 67 — 75 — 83 — 91 — 99 — 107 — 115 — 123 — 131 — 139 →

Start at 67 and add 8 each time.

3. ← 935 — 835 — 735 — 635 — 535 — 435 — 335 — 235 — 135 — 35 →

Start at 935 and subtract 100 each time.

4. ← 75 — 87 — 99 — 111 — 123 — 135 — 147 — 159 — 171 — 183 →

Start at 75 and add 12 each time.

5. ← 89 — 82 — 75 — 68 — 61 — 54 — 47 — 40 — 33 — 26 →

Start at 89 and subtract 7 each time.

6. ← 47 — 62 — 77 — 92 — 107 — 122 — 137 — 152 — 167 — 182 →

Start at 47 and add 15 each time.

7. ← 28 — 25 — 22 — 19 — 16 — 13 — 10 — 7 — 4 — 1 →

Start at 28 and subtract 3 each time.

8. ← 94 — 95 — 96 — 97 — 98 — 99 — 100 — 101 — 102 — 103 →

Start at 94 and add 1 each time.

9. ← 105 — 100 — 95 — 90 — 85 — 80 — 75 — 70 — 65 — 60 →

Start at 105 and subtract 5 each time.

10. ← 12 — 21 — 30 — 39 — 48 — 57 — 66 — 75 — 84 — 93 →

Start at 12 and add 9 each time.

# Number Patterns (J)

Name: \_\_\_\_\_

Date: \_\_\_\_\_

Identify, complete and describe each number pattern.

1.  $\leftarrow$ 

|     |  |  |  |  |  |  |  |    |  |    |
|-----|--|--|--|--|--|--|--|----|--|----|
| 157 |  |  |  |  |  |  |  | 73 |  | 49 |
|-----|--|--|--|--|--|--|--|----|--|----|

 $\rightarrow$

2.  $\leftarrow$ 

|    |  |  |  |  |     |  |  |     |  |
|----|--|--|--|--|-----|--|--|-----|--|
| 90 |  |  |  |  | 135 |  |  | 162 |  |
|----|--|--|--|--|-----|--|--|-----|--|

 $\rightarrow$

3.  $\leftarrow$ 

|    |    |    |  |  |  |  |  |  |  |  |
|----|----|----|--|--|--|--|--|--|--|--|
| 91 | 84 | 77 |  |  |  |  |  |  |  |  |
|----|----|----|--|--|--|--|--|--|--|--|

 $\rightarrow$

4.  $\leftarrow$ 

|  |  |  |  |  |     |  |  |     |     |
|--|--|--|--|--|-----|--|--|-----|-----|
|  |  |  |  |  | 103 |  |  | 127 | 135 |
|--|--|--|--|--|-----|--|--|-----|-----|

 $\rightarrow$

5.  $\leftarrow$ 

|  |  |     |  |  |     |     |  |  |  |
|--|--|-----|--|--|-----|-----|--|--|--|
|  |  | 430 |  |  | 280 | 230 |  |  |  |
|--|--|-----|--|--|-----|-----|--|--|--|

 $\rightarrow$

6.  $\leftarrow$ 

|  |    |  |    |  |  |  |     |  |  |
|--|----|--|----|--|--|--|-----|--|--|
|  | 47 |  | 67 |  |  |  | 107 |  |  |
|--|----|--|----|--|--|--|-----|--|--|

 $\rightarrow$

7.  $\leftarrow$ 

|    |  |  |  |  |    |    |  |  |  |
|----|--|--|--|--|----|----|--|--|--|
| 45 |  |  |  |  | 30 | 27 |  |  |  |
|----|--|--|--|--|----|----|--|--|--|

 $\rightarrow$

8.  $\leftarrow$ 

|  |  |  |  |     |  |  |  |     |     |
|--|--|--|--|-----|--|--|--|-----|-----|
|  |  |  |  | 157 |  |  |  | 217 | 232 |
|--|--|--|--|-----|--|--|--|-----|-----|

 $\rightarrow$

9.  $\leftarrow$ 

|  |  |     |    |  |  |  |  |  |    |
|--|--|-----|----|--|--|--|--|--|----|
|  |  | 100 | 95 |  |  |  |  |  | 65 |
|--|--|-----|----|--|--|--|--|--|----|

 $\rightarrow$

10.  $\leftarrow$ 

|  |  |  |   |  |    |    |  |  |  |
|--|--|--|---|--|----|----|--|--|--|
|  |  |  | 9 |  | 11 | 12 |  |  |  |
|--|--|--|---|--|----|----|--|--|--|

 $\rightarrow$

# Number Patterns (J) Answers

Name: \_\_\_\_\_

Date: \_\_\_\_\_

Identify, complete and describe each number pattern.

1. ← 157 — 145 — 133 — 121 — 109 — 97 — 85 — 73 — 61 — 49 →

Start at 157 and subtract 12 each time.

2. ← 90 — 99 — 108 — 117 — 126 — 135 — 144 — 153 — 162 — 171 →

Start at 90 and add 9 each time.

3. ← 91 — 84 — 77 — 70 — 63 — 56 — 49 — 42 — 35 — 28 →

Start at 91 and subtract 7 each time.

4. ← 63 — 71 — 79 — 87 — 95 — 103 — 111 — 119 — 127 — 135 →

Start at 63 and add 8 each time.

5. ← 530 — 480 — 430 — 380 — 330 — 280 — 230 — 180 — 130 — 80 →

Start at 530 and subtract 50 each time.

6. ← 37 — 47 — 57 — 67 — 77 — 87 — 97 — 107 — 117 — 127 →

Start at 37 and add 10 each time.

7. ← 45 — 42 — 39 — 36 — 33 — 30 — 27 — 24 — 21 — 18 →

Start at 45 and subtract 3 each time.

8. ← 97 — 112 — 127 — 142 — 157 — 172 — 187 — 202 — 217 — 232 →

Start at 97 and add 15 each time.

9. ← 110 — 105 — 100 — 95 — 90 — 85 — 80 — 75 — 70 — 65 →

Start at 110 and subtract 5 each time.

10. ← 6 — 7 — 8 — 9 — 10 — 11 — 12 — 13 — 14 — 15 →

Start at 6 and add 1 each time.