

Number Patterns (H)

Name: _____

Date: _____

Identify, complete and describe each number pattern.

1. ← — — — 54 — 51 — — — — — 36 →

2. ← — — 756 — 656 — — 456 — — — — →

3. ← 77 — 69 — — — — — — — 13 — →

4. ← — — — — — 106 — — — 85 — 78 →

5. ← 133 — — — — — — 61 — 49 — — →

6. ← — — — — — 53 — 44 — — 26 — →

7. ← — — 163 — 153 — — — — — 103 — →

8. ← — 108 — — — 93 — 88 — — — — →

9. ← — — 224 — — — 149 — 124 — — — →

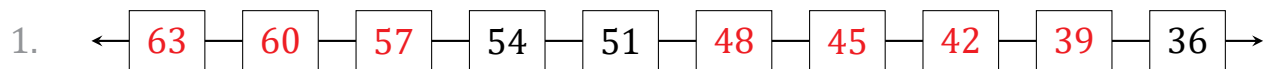
10. ← — — 122 — — — — — 67 — 56 — →

Number Patterns (H) Answers

Name: _____

Date: _____

Identify, complete and describe each number pattern.



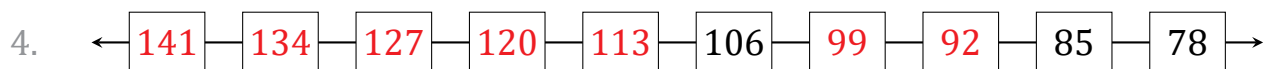
Start at 63 and subtract 3 each time.



Start at 956 and subtract 100 each time.



Start at 77 and subtract 8 each time.



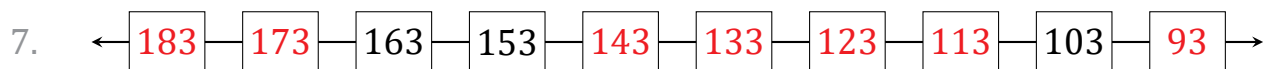
Start at 141 and subtract 7 each time.



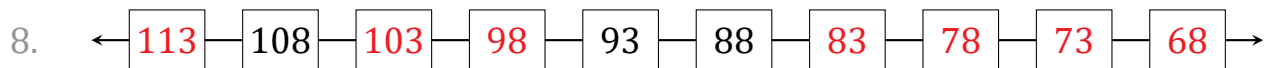
Start at 133 and subtract 12 each time.



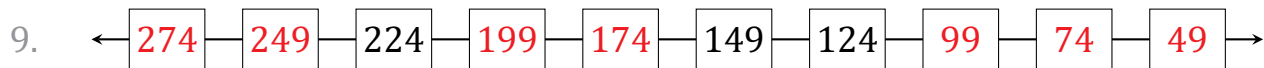
Start at 98 and subtract 9 each time.



Start at 183 and subtract 10 each time.



Start at 113 and subtract 5 each time.



Start at 274 and subtract 25 each time.



Start at 144 and subtract 11 each time.