

# Number Patterns (F)

Name: \_\_\_\_\_

Date: \_\_\_\_\_

Identify, complete and describe each number pattern.

1.  $\leftarrow$             $\rightarrow$

2.  $\leftarrow$             $\rightarrow$

3.  $\leftarrow$             $\rightarrow$

4.  $\leftarrow$              $\rightarrow$

5.  $\leftarrow$             $\rightarrow$

6.  $\leftarrow$             $\rightarrow$

7.  $\leftarrow$             $\rightarrow$

8.  $\leftarrow$             $\rightarrow$

9.  $\leftarrow$             $\rightarrow$

10.  $\leftarrow$             $\rightarrow$

# Number Patterns (F) Answers

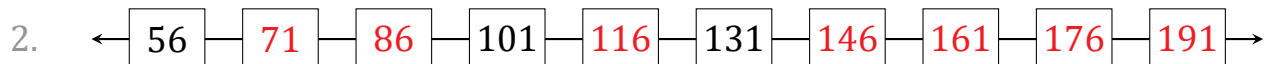
Name: \_\_\_\_\_

Date: \_\_\_\_\_

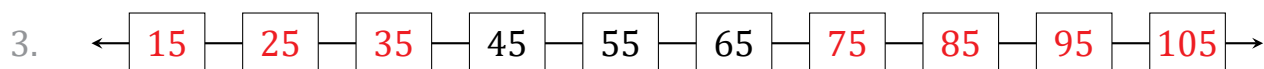
Identify, complete and describe each number pattern.



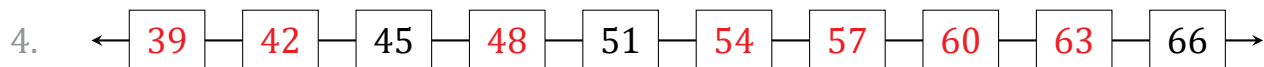
Start at 24 and add 4 each time.



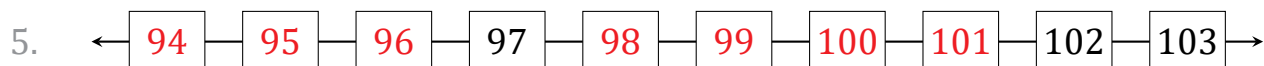
Start at 56 and add 15 each time.



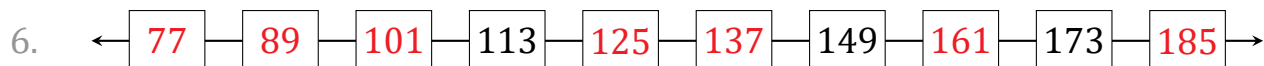
Start at 15 and add 10 each time.



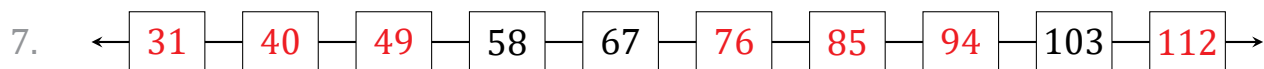
Start at 39 and add 3 each time.



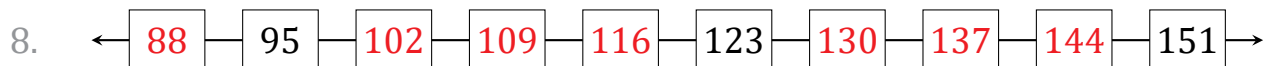
Start at 94 and add 1 each time.



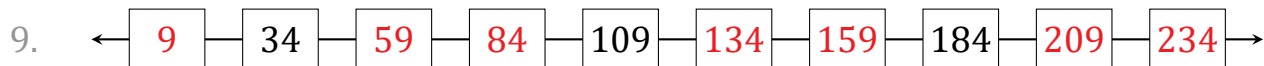
Start at 77 and add 12 each time.



Start at 31 and add 9 each time.



Start at 88 and add 7 each time.



Start at 9 and add 25 each time.



Start at 68 and add 50 each time.