





















# Percentage Increase/Decrease (F)

Name: \_\_\_\_\_

Date: \_\_\_\_\_

Calculate the percentage increase or decrease.

	Original Amount		New Amount	Increase or Decrease	Percentage Change
1.	\$855	→	\$513	 	
-----					
2.	\$628	→	\$1099	 	
-----					
3.	\$260	→	\$39	 	
-----					
4.	\$740	→	\$1443	 	
-----					
5.	\$300	→	\$105	 	
-----					
6.	\$415	→	\$332	 	
-----					
7.	\$740	→	\$814	 	
-----					
8.	\$150	→	\$105	 	
-----					
9.	\$800	→	\$920	 	
-----					
10.	\$840	→	\$1302	 	
-----					