





Percentage Increase/Decrease (C)



Name: _____



Date: _____



Calculate the percentage increase or decrease.



	Original Amount		New Amount	Increase or Decrease	Percentage Change
1.	\$700	→	\$714	 	



2.	\$300	→	\$261	 	



3.	\$100	→	\$105	 	



4.	\$950	→	\$1102	 	

5.	\$925	→	\$814	 	

6.	\$200	→	\$194	 	

7.	\$300	→	\$267	 	

8.	\$400	→	\$440	 	

9.	\$650	→	\$689	 	

10.	\$700	→	\$693	