





Percentage Increase/Decrease (F)



Name: _____



Date: _____



Calculate the percentage increase or decrease.



	Original Amount		New Amount	Increase or Decrease	Percentage Change
1.	\$4.66	→	\$2.33	 	



2.	\$2.40	→	\$3.24	 	



3.	\$7.80	→	\$0.39	 	



4.	\$3.80	→	\$7.03	 	

5.	\$4.80	→	\$6.96	 	

6.	\$8.32	→	\$6.24	 	

7.	\$3.30	→	\$4.29	 	

8.	\$4.80	→	\$8.16	 	

9.	\$9.10	→	\$5.46	 	

10.	\$7.16	→	\$1.79	