





Percentage Increase/Decrease (H)



Name: _____



Date: _____



Calculate the percentage increase or decrease.



	Original Amount		New Amount	Increase or Decrease	Percentage Change
1.	\$1.10	→	\$1.76	 	



2.	\$8.60	→	\$0.86	 	



3.	\$7.80	→	\$10.53	 	



4.	\$2.60	→	\$3.77	 	

5.	\$2.20	→	\$0.44	 	

6.	\$9.40	→	\$0.47	 	

7.	\$1.40	→	\$1.82	 	

8.	\$4.00	→	\$3.80	 	

9.	\$3.60	→	\$6.12	 	

10.	\$4.00	→	\$1.80	