





Percentage Increase/Decrease (A)



Name: _____



Date: _____



Calculate the percentage increase or decrease.



	Original Amount		New Amount	Increase or Decrease	Percentage Change
1.	\$7.00	→	\$1.75	 	



2.	\$6.64	→	\$8.30	 	



3.	\$6.30	→	\$9.45	 	



4.	\$3.08	→	\$4.62	 	

5.	\$7.04	→	\$1.76	 	

6.	\$2.60	→	\$1.30	 	

7.	\$8.76	→	\$15.33	 	

8.	\$6.92	→	\$12.11	 	

9.	\$4.32	→	\$3.24	 	

10.	\$9.34	→	\$4.67	