





Percentage Increase/Decrease (F)



Name: _____



Date: _____



Calculate the percentage increase or decrease.



	Original Amount		New Amount	Increase or Decrease	Percentage Change
1.	\$5.32	→	\$3.99	 	



2.	\$9.48	→	\$2.37	 	



3.	\$6.40	→	\$3.20	 	



4.	\$1.80	→	\$3.15	 	

5.	\$6.38	→	\$9.57	 	

6.	\$5.04	→	\$2.52	 	

7.	\$9.96	→	\$14.94	 	

8.	\$6.72	→	\$11.76	 	

9.	\$6.16	→	\$4.62	 	

10.	\$2.76	→	\$4.83	