



















Percentage Increase/Decrease (C)

Name: _____

Date: _____

Calculate the percentage increase or decrease.

	Original Amount		New Amount	Increase or Decrease	Percentage Change
1.	760	→	646	 	
2.	500	→	850	 	
3.	515	→	618	 	
4.	560	→	588	 	
5.	710	→	1278	 	
6.	220	→	99	 	
7.	750	→	1050	 	
8.	580	→	406	 	
9.	480	→	264	 	
10.	690	→	621	