





Percentage Increase/Decrease (J)



Name: _____



Date: _____



Calculate the percentage increase or decrease.



	Original Amount		New Amount	Increase or Decrease	Percentage Change
1.	272	→	68	 	



2.	568	→	426	 	



3.	902	→	1353	 	



4.	968	→	1452	 	

5.	264	→	132	 	

6.	548	→	959	 	

7.	976	→	732	 	

8.	348	→	609	 	

9.	596	→	894	 	

10.	156	→	39	