



















Percentage Increase/Decrease (B)

Name: _____

Date: _____

Calculate the percentage increase or decrease.

	Original Amount		New Amount	Increase or Decrease	Percentage Change
1.	575	→	598	 	
2.	600	→	606	 	
3.	250	→	215	 	
4.	785	→	628	 	
5.	500	→	590	 	
6.	450	→	423	 	
7.	240	→	276	 	
8.	400	→	364	 	
9.	100	→	81	 	
10.	400	→	408	