



















Percentage Increase/Decrease (C)

Name: _____

Date: _____

Calculate the percentage increase or decrease.

	Original Amount		New Amount	Increase or Decrease	Percentage Change
1.	975	→	1014	 	
2.	900	→	918	 	
3.	300	→	255	 	
4.	100	→	118	 	
5.	600	→	714	 	
6.	850	→	680	 	
7.	500	→	430	 	
8.	800	→	760	 	
9.	400	→	332	 	
10.	200	→	222	