


St. Patrick's Day Counting (C)

Count how many Leprechaun hats there are in each group.

1. There are ____ leprechaun hats in the group below.



2. There are ____ leprechaun hats in the group below.




3. There are ____ leprechaun hats in the group below.



4. There are ____ leprechaun hats in the group below.



5. There are ____ leprechaun hats in the group below.



6. There are ____ leprechaun hats in the group below.




St. Patrick's Day Counting (C) Answers

Count how many Leprechaun hats there are in each group.

1. There are 11 leprechaun hats in the group below.



2. There are 42 leprechaun hats in the group below.




3. There are 4 leprechaun hats in the group below.



4. There are 7 leprechaun hats in the group below.



5. There are 16 leprechaun hats in the group below.



6. There are 2 leprechaun hats in the group below.

