



# St. Patrick's Day Counting (A)

Count how many Leprechaun hats there are in each group.

1. There are \_\_\_\_ leprechaun hats in the group below.




2. There are \_\_\_\_ leprechaun hats in the group below.



3. There are \_\_\_\_ leprechaun hats in the group below.



4. There are \_\_\_\_ leprechaun hats in the group below.



5. There are \_\_\_\_ leprechaun hats in the group below.



6. There are \_\_\_\_ leprechaun hats in the group below.

