


# St. Patrick's Day Counting (E)

Count how many Leprechaun hats there are in each group.

1. There are \_\_\_\_ leprechaun hats in the group below.




2. There are \_\_\_\_ leprechaun hats in the group below.




3. There are \_\_\_\_ leprechaun hats in the group below.



4. There are \_\_\_\_ leprechaun hats in the group below.



5. There are \_\_\_\_ leprechaun hats in the group below.



6. There are \_\_\_\_ leprechaun hats in the group below.




# St. Patrick's Day Counting (E) Answers

Count how many Leprechaun hats there are in each group.

1. There are 15 leprechaun hats in the group below.




2. There are 28 leprechaun hats in the group below.




3. There are 21 leprechaun hats in the group below.



4. There are 42 leprechaun hats in the group below.



5. There are 30 leprechaun hats in the group below.



6. There are 10 leprechaun hats in the group below.

