


St. Patrick's Day Counting (E)

Count how many Leprechaun hats there are in each group.


1. There are ____ leprechaun hats in the group below.




2. There are ____ leprechaun hats in the group below.




3. There are ____ leprechaun hats in the group below.



4. There are ____ leprechaun hats in the group below.



5. There are ____ leprechaun hats in the group below.



6. There are ____ leprechaun hats in the group below.

