



St. Patrick's Day Counting (H)

Count how many Leprechaun hats there are in each group.

1. There are ____ leprechaun hats in the group below.




2. There are ____ leprechaun hats in the group below.



3. There are ____ leprechaun hats in the group below.



4. There are ____ leprechaun hats in the group below.



5. There are ____ leprechaun hats in the group below.




6. There are ____ leprechaun hats in the group below.




St. Patrick's Day Counting (H) Answers

Count how many Leprechaun hats there are in each group.

1. There are 24 leprechaun hats in the group below.




2. There are 35 leprechaun hats in the group below.




3. There are 18 leprechaun hats in the group below.



4. There are 25 leprechaun hats in the group below.



5. There are 21 leprechaun hats in the group below.



6. There are 15 leprechaun hats in the group below.

