













# Pot of Gold Multiplication (A)

Instructions: Can you find Lucky's real pot of gold? Maybe he has more than one hidden. Circle all of the pots with a product of 12.



# Pot of Gold Multiplication (A) Answers

Instructions: Can you find Lucky's real pot of gold? Maybe he has more than one hidden. Circle all of the pots with a product of 12.

$$\begin{array}{r} 1 \\ \times 6 \\ \hline 6 \end{array}$$

$$\begin{array}{r} 4 \\ \times 5 \\ \hline 20 \end{array}$$

$$\begin{array}{r} 2 \\ \times 6 \\ \hline 12 \end{array}$$

Lucky's Pot

$$\begin{array}{r} 3 \\ \times 6 \\ \hline 18 \end{array}$$

$$\begin{array}{r} 6 \\ \times 2 \\ \hline 12 \end{array}$$

$$\begin{array}{r} 1 \\ \times 1 \\ \hline 1 \end{array}$$

Lucky's Pot

$$\begin{array}{r} 7 \\ \times 3 \\ \hline 21 \end{array}$$

$$\begin{array}{r} 4 \\ \times 2 \\ \hline 8 \end{array}$$

$$\begin{array}{r} 4 \\ \times 7 \\ \hline 28 \end{array}$$

$$\begin{array}{r} 1 \\ \times 7 \\ \hline 7 \end{array}$$

$$\begin{array}{r} 2 \\ \times 6 \\ \hline 12 \end{array}$$

$$\begin{array}{r} 6 \\ \times 5 \\ \hline 30 \end{array}$$

Lucky's Pot