













# Pot of Gold Multiplication (B)

Instructions: Can you find Lucky's real pot of gold? Maybe he has more than one hidden. Circle all of the pots with a product of 36.



## Pot of Gold Multiplication (B) Answers

Instructions: Can you find Lucky's real pot of gold? Maybe he has more than one hidden. Circle all of the pots with a product of 36.

$$\begin{array}{r} 4 \\ \times 3 \\ \hline 12 \end{array}$$

$$\begin{array}{r} 4 \\ \times 6 \\ \hline 24 \end{array}$$

$$\begin{array}{r} 3 \\ \times 3 \\ \hline 9 \end{array}$$

$$\begin{array}{r} 6 \\ \times 7 \\ \hline 42 \end{array}$$

$$\begin{array}{r} 7 \\ \times 7 \\ \hline 49 \end{array}$$

$$\begin{array}{r} 7 \\ \times 8 \\ \hline 56 \end{array}$$

$$\begin{array}{r} 5 \\ \times 5 \\ \hline 25 \end{array}$$

$$\begin{array}{r} 6 \\ \times 8 \\ \hline 48 \end{array}$$

$$\begin{array}{r} 8 \\ \times 4 \\ \hline 32 \end{array}$$

$$\begin{array}{r} 4 \\ \times 3 \\ \hline 12 \end{array}$$

$$\begin{array}{r} 4 \\ \times 7 \\ \hline 28 \end{array}$$

$$\begin{array}{r} 9 \\ \times 4 \\ \hline 36 \end{array}$$

Lucky's Pot