






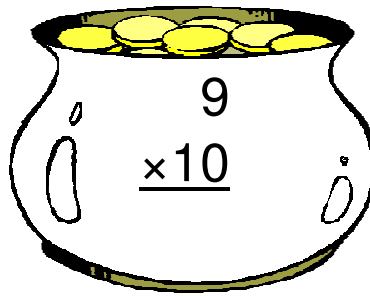






# Pot of Gold Multiplication (A)

Instructions: Can you find Lucky's real pot of gold? Maybe he has more than one hidden. Circle all of the pots with a product of 80.



# Pot of Gold Multiplication (A) Answers

Instructions: Can you find Lucky's real pot of gold? Maybe he has more than one hidden. Circle all of the pots with a product of 80.

$$\begin{array}{r} 9 \\ \times 7 \\ \hline 63 \end{array}$$

$$\begin{array}{r} 10 \\ \times 11 \\ \hline 110 \end{array}$$

$$\begin{array}{r} 11 \\ \times 9 \\ \hline 99 \end{array}$$

$$\begin{array}{r} 8 \\ \times 6 \\ \hline 48 \end{array}$$

$$\begin{array}{r} 9 \\ \times 10 \\ \hline 90 \end{array}$$

$$\begin{array}{r} 11 \\ \times 12 \\ \hline 132 \end{array}$$

$$\begin{array}{r} 8 \\ \times 12 \\ \hline 96 \end{array}$$

$$\begin{array}{r} 10 \\ \times 6 \\ \hline 60 \end{array}$$

$$\begin{array}{r} 12 \\ \times 10 \\ \hline 120 \end{array}$$

$$\begin{array}{r} 6 \\ \times 6 \\ \hline 36 \end{array}$$

$$\begin{array}{r} 10 \\ \times 8 \\ \hline 80 \end{array}$$

$$\begin{array}{r} 5 \\ \times 10 \\ \hline 50 \end{array}$$

Lucky's Pot