









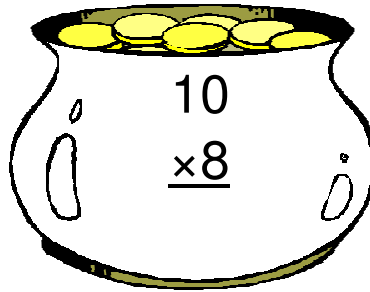



Pot of Gold Multiplication (H)

Instructions: Can you find Lucky's real pot of gold? Maybe he has more than one hidden. Circle all of the pots with a product of 100.



Pot of Gold Multiplication (H) Answers

Instructions: Can you find Lucky's real pot of gold? Maybe he has more than one hidden. Circle all of the pots with a product of 100.

$$\begin{array}{r} 5 \\ \times 6 \\ \hline 30 \end{array}$$

$$\begin{array}{r} 10 \\ \times 8 \\ \hline 80 \end{array}$$

$$\begin{array}{r} 8 \\ \times 9 \\ \hline 72 \end{array}$$

$$\begin{array}{r} 12 \\ \times 5 \\ \hline 60 \end{array}$$

$$\begin{array}{r} 12 \\ \times 8 \\ \hline 96 \end{array}$$

$$\begin{array}{r} 6 \\ \times 6 \\ \hline 36 \end{array}$$

$$\begin{array}{r} 10 \\ \times 7 \\ \hline 70 \end{array}$$

$$\begin{array}{r} 5 \\ \times 12 \\ \hline 60 \end{array}$$

$$\begin{array}{r} 10 \\ \times 10 \\ \hline 100 \end{array}$$

Lucky's Pot

$$\begin{array}{r} 12 \\ \times 12 \\ \hline 144 \end{array}$$

$$\begin{array}{r} 12 \\ \times 12 \\ \hline 144 \end{array}$$

$$\begin{array}{r} 5 \\ \times 12 \\ \hline 60 \end{array}$$