


Autumn Trees Picture Ratios (F)

Name: _____


Date: _____

Determine each ratio and simplify if necessary.



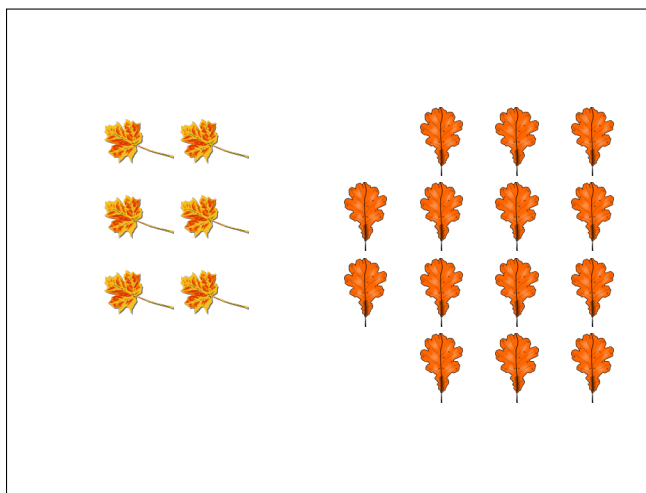
$$\text{leaf} : (\text{tree} + \text{leaf}) =$$

$$\text{tree} : \text{leaf} =$$




$$\text{acorn} : \text{tree} =$$

$$\text{tree} : (\text{acorn} + \text{tree}) =$$



$$\text{yellow leaf} : (\text{oak leaf} + \text{yellow leaf}) =$$

$$\text{oak leaf} : \text{yellow leaf} =$$



$$\text{brown leaf} : (\text{yellow leaf} + \text{brown leaf}) =$$


$$\text{yellow leaf} : \text{brown leaf} =$$

Autumn Trees Picture Ratios (F) Answers

Name: _____


Date: _____

Determine each ratio and simplify if necessary.



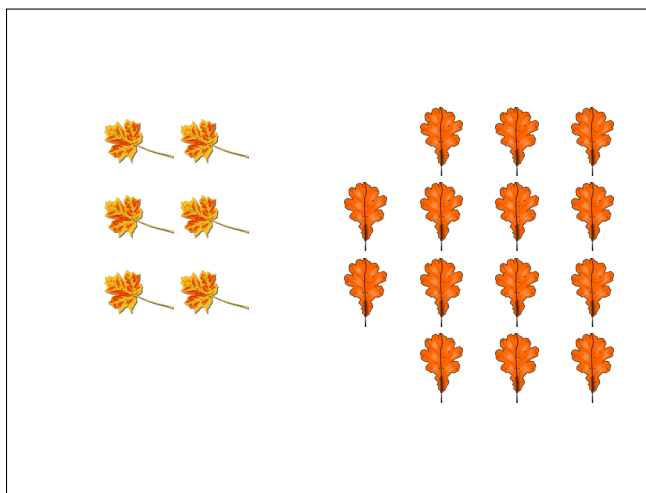
$$\text{leaf} : (\text{tree} + \text{leaf}) = 4 : 11$$

$$\text{tree} : \text{leaf} = 7 : 4$$




$$\text{acorn} : \text{tree} = 23 : 21$$

$$\text{tree} : (\text{acorn} + \text{tree}) = 21 : 44$$



$$\text{yellow leaf} : (\text{orange leaf} + \text{yellow leaf}) = 6 : 20 = 3 : 10$$

$$\text{orange leaf} : \text{yellow leaf} = 14 : 6 = 7 : 3$$



$$\text{brown leaf} : (\text{yellow leaf} + \text{brown leaf}) = 8 : 24 = 1 : 3$$

$$\text{yellow leaf} : \text{brown leaf} = 16 : 8 = 2 : 1$$