


Autumn Trees Picture Ratios (A)

Name: _____


Date: _____

Determine each ratio and simplify if necessary.




$$\text{leaf} : (\text{acorn} + \text{leaf}) =$$

$$\text{acorn} : \text{leaf} =$$




$$\text{tree} : \text{leaf} =$$

$$\text{leaf} : (\text{tree} + \text{leaf}) =$$



$$\text{leaf} : (\text{branch} + \text{leaf}) =$$

$$\text{branch} : \text{leaf} =$$



$$\text{tree} : (\text{leaf} + \text{tree}) =$$


$$\text{leaf} : \text{tree} =$$

Autumn Trees Picture Ratios (A) Answers

Name: _____


Date: _____

Determine each ratio and simplify if necessary.



$$\text{leaf} : (\text{acorn} + \text{leaf}) = 6 : 13$$

$$\text{acorn} : \text{leaf} = 7 : 6$$




$$\text{tree} : \text{leaf} = 6 : 8 = 3 : 4$$

$$\text{leaf} : (\text{tree} + \text{leaf}) = 8 : 14 = 4 : 7$$



$$\text{leaf} : (\text{branch} + \text{leaf}) = 6 : 17$$

$$\text{branch} : \text{leaf} = 11 : 6$$



$$\text{tree} : (\text{leaf} + \text{tree}) = 7 : 15$$

$$\text{leaf} : \text{tree} = 8 : 7$$