


Autumn Trees Picture Ratios (A)

Name: _____


Date: _____

Determine each ratio and simplify if necessary.




$$\text{leafy branch} : \text{tree} =$$

$$\text{tree} : \text{leafy branch} =$$



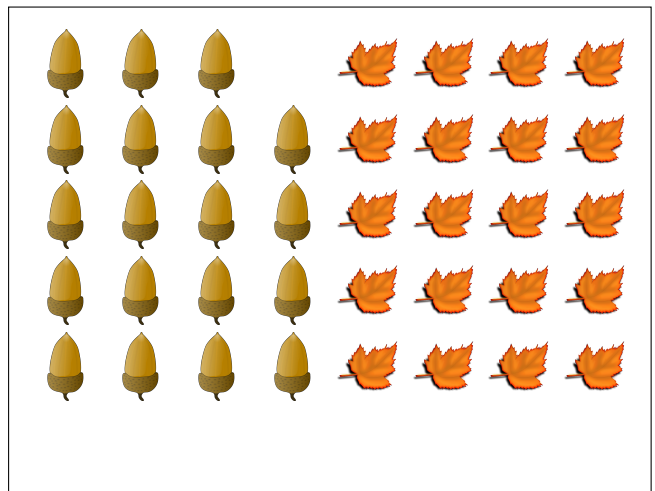
$$\text{maple leaf} : \text{oak leaf} =$$

$$\text{oak leaf} : \text{maple leaf} =$$



$$\text{yellow maple leaf} : \text{tree} =$$

$$\text{tree} : \text{yellow maple leaf} =$$



$$\text{acorn} : \text{leaf} =$$

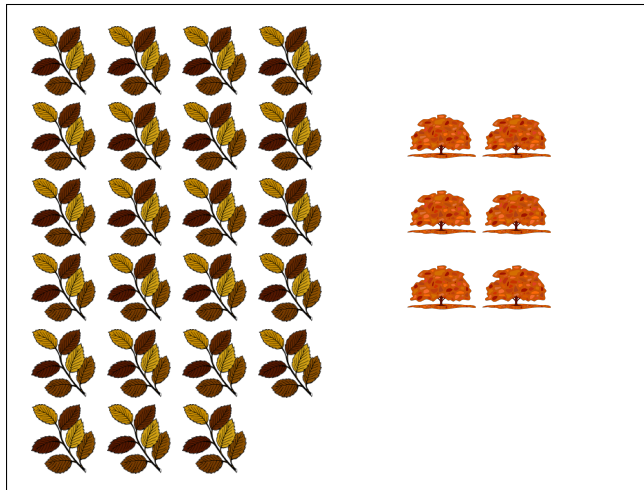
$$\text{leaf} : \text{acorn} =$$

Autumn Trees Picture Ratios (A) Answers

Name: _____

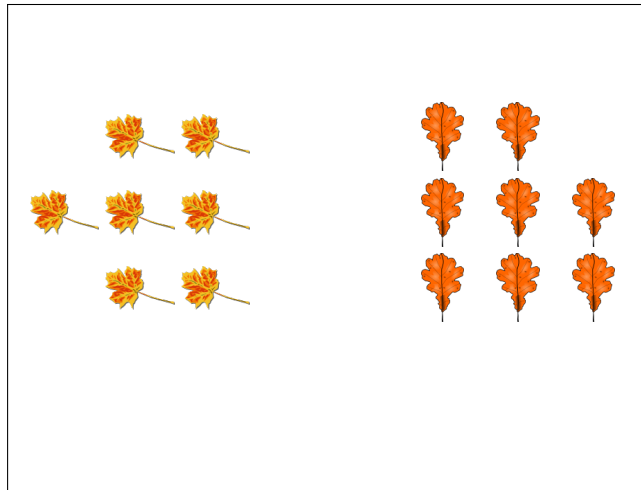
Date: _____

Determine each ratio and simplify if necessary.




$$\text{leafy branch} : \text{autumn tree} = 23 : 6$$

$$\text{autumn tree} : \text{leafy branch} = 6 : 23$$



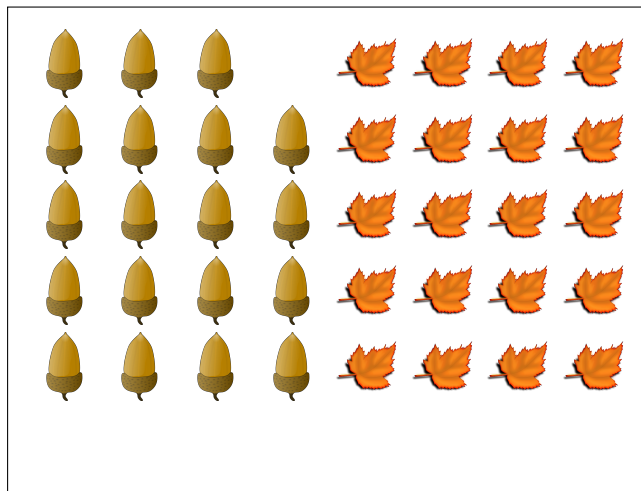
$$\text{maple leaf} : \text{oak leaf} = 7 : 8$$

$$\text{oak leaf} : \text{maple leaf} = 8 : 7$$



$$\text{yellow maple leaf} : \text{autumn tree} = 24 : 5$$

$$\text{autumn tree} : \text{yellow maple leaf} = 5 : 24$$



$$\text{acorn} : \text{maple leaf} = 19 : 20$$

$$\text{maple leaf} : \text{acorn} = 20 : 19$$