

# Autumn Trees Picture Ratios (F)

Name: \_\_\_\_\_


Date: \_\_\_\_\_

Determine each ratio and simplify if necessary.



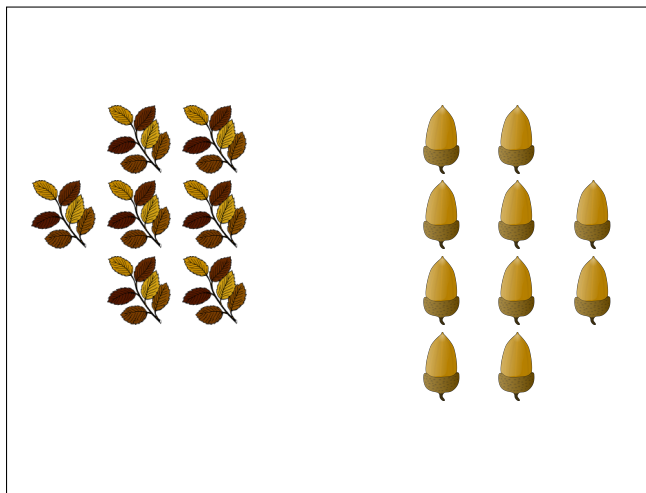
$$\text{Large leaf} : \text{Small leaf} =$$

$$\text{Small leaf} : \text{Large leaf} =$$




$$\text{Orange tree} : \text{Yellow tree} =$$

$$\text{Yellow tree} : \text{Orange tree} =$$



$$\text{Green leaf} : \text{Acorn} =$$

$$\text{Acorn} : \text{Green leaf} =$$



$$\text{Yellow leaf} : \text{Orange leaf} =$$

$$\text{Orange leaf} : \text{Yellow leaf} =$$

# Autumn Trees Picture Ratios (F) Answers

Name: \_\_\_\_\_

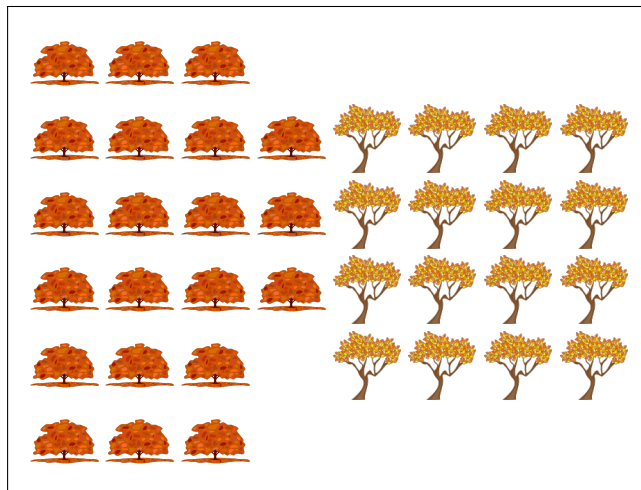
Date: \_\_\_\_\_

Determine each ratio and simplify if necessary.




$$\text{Oak leaf} : \text{Maple leaf} = 19 : 17$$

$$\text{Maple leaf} : \text{Oak leaf} = 17 : 19$$



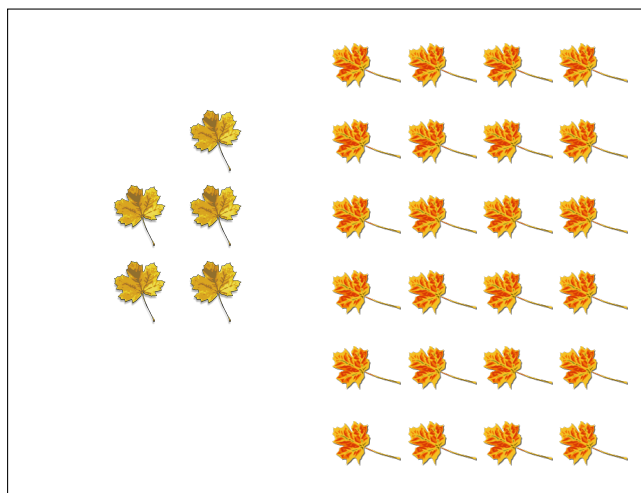
$$\text{Orange tree} : \text{Yellow tree} = 21 : 16$$

$$\text{Yellow tree} : \text{Orange tree} = 16 : 21$$



$$\text{Sprig} : \text{Acorn} = 7 : 10$$

$$\text{Acorn} : \text{Sprig} = 10 : 7$$



$$\text{Maple leaf} : \text{Yellow leaf} = 5 : 24$$

$$\text{Yellow leaf} : \text{Maple leaf} = 24 : 5$$