


# Autumn Trees Picture Ratios (A)

Name: \_\_\_\_\_


Date: \_\_\_\_\_

Determine each ratio and simplify if necessary.




 :  =

 :  =




 :  =

 :  =



 :  =

 :  =



 :  =


 :  =

# Autumn Trees Picture Ratios (A) Answers

Name: \_\_\_\_\_


Date: \_\_\_\_\_

Determine each ratio and simplify if necessary.



$$\text{acorn} : \text{leaf} = 2 : 3$$

$$\text{leaf} : \text{acorn} = 3 : 2$$




$$\text{leaf} : \text{tree} = 5 : 6$$

$$\text{tree} : \text{leaf} = 6 : 5$$



$$\text{yellow leaf} : \text{brown leaf} = 6 : 8 = 3 : 4$$

$$\text{brown leaf} : \text{yellow leaf} = 8 : 6 = 4 : 3$$



$$\text{yellow tree} : \text{orange tree} = 10 : 17$$

$$\text{orange tree} : \text{yellow tree} = 17 : 10$$