


# Autumn Trees Picture Ratios (B)

Name: \_\_\_\_\_

Date: \_\_\_\_\_

Determine each ratio and simplify if necessary.




$$\text{tree} : \text{leaf} =$$

$$\text{leaf} : \text{tree} =$$




$$\text{leaf} : \text{acorn} =$$

$$\text{acorn} : \text{leaf} =$$



$$\text{tree} : \text{branch} =$$

$$\text{branch} : \text{tree} =$$



$$\text{orange leaf} : \text{yellow leaf} =$$


$$\text{yellow leaf} : \text{orange leaf} =$$

# Autumn Trees Picture Ratios (B) Answers

Name: \_\_\_\_\_

Date: \_\_\_\_\_

Determine each ratio and simplify if necessary.



$$\text{tree} : \text{leaf} = 14 : 23$$

$$\text{leaf} : \text{tree} = 23 : 14$$




$$\text{leaf} : \text{acorn} = 14 : 13$$

$$\text{acorn} : \text{leaf} = 13 : 14$$



$$\text{bush} : \text{branch} = 10 : 6 = 5 : 3$$

$$\text{branch} : \text{bush} = 6 : 10 = 3 : 5$$



$$\text{flower} : \text{leaf} = 23 : 17$$

$$\text{leaf} : \text{flower} = 17 : 23$$