


Autumn Trees Picture Ratios (F)

Name: _____

Date: _____

Determine each ratio and simplify if necessary.



 :  =

 :  =




 :  =

 :  =



 :  =

 :  =



 :  =


 :  =

Autumn Trees Picture Ratios (F) Answers

Name: _____

Date: _____

Determine each ratio and simplify if necessary.



$$\text{Yellow tree} : \text{Orange tree} = 10 : 13$$

$$\text{Orange tree} : \text{Yellow tree} = 13 : 10$$




$$\text{Leaf} : \text{Acorn} = 10 : 14 = 5 : 7$$

$$\text{Acorn} : \text{Leaf} = 14 : 10 = 7 : 5$$



$$\text{Yellow leaf} : \text{Orange leaf} = 13 : 14$$

$$\text{Orange leaf} : \text{Yellow leaf} = 14 : 13$$



$$\text{Orange leaf} : \text{Yellow leaf} = 18 : 22 = 9 : 11$$

$$\text{Yellow leaf} : \text{Orange leaf} = 22 : 18 = 11 : 9$$