

Autumn Trees Picture Ratios (G)

Name: _____


Date: _____

Determine each ratio and simplify if necessary.




$$\text{orange leaf} : \text{yellow leaf} =$$

$$\text{yellow leaf} : \text{orange leaf} =$$




$$\text{orange tree} : \text{yellow tree} =$$

$$\text{yellow tree} : \text{orange tree} =$$



$$\text{yellow leaf} : \text{brown leaf} =$$

$$\text{brown leaf} : \text{yellow leaf} =$$



$$\text{acorn} : \text{yellow leaf} =$$


$$\text{yellow leaf} : \text{acorn} =$$

Autumn Trees Picture Ratios (G) Answers

Name: _____


Date: _____

Determine each ratio and simplify if necessary.




$$\text{leaf with stem} : \text{leaf without stem} = 9 : 9 = 1 : 1$$

$$\text{leaf without stem} : \text{leaf with stem} = 9 : 9 = 1 : 1$$



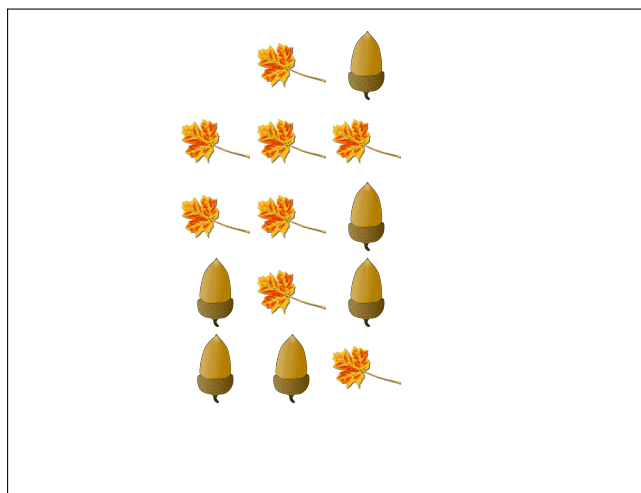
$$\text{brown tree} : \text{yellow tree} = 14 : 23$$

$$\text{yellow tree} : \text{brown tree} = 23 : 14$$



$$\text{leaf with stem} : \text{leaf without stem} = 6 : 6 = 1 : 1$$

$$\text{leaf without stem} : \text{leaf with stem} = 6 : 6 = 1 : 1$$



$$\text{acorn} : \text{leaf with stem} = 6 : 8 = 3 : 4$$

$$\text{leaf with stem} : \text{acorn} = 8 : 6 = 4 : 3$$