

Autumn Trees Picture Ratios (I)

Name: _____

Date: _____

Determine each ratio and simplify if necessary.



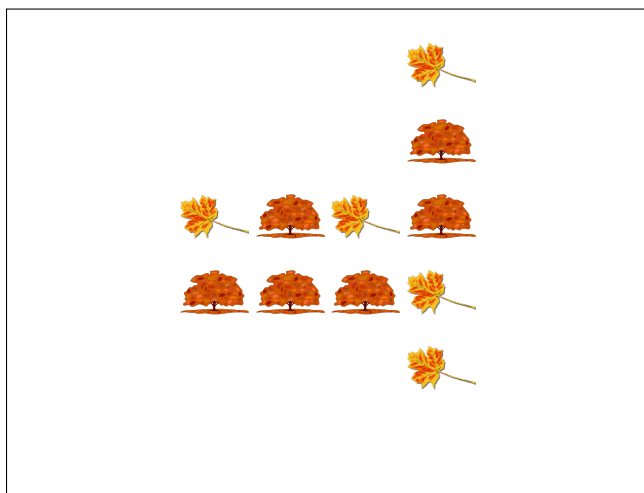
 :  =

 :  =




 :  =

 :  =



 :  =

 :  =



 :  =

 :  =

Autumn Trees Picture Ratios (I) Answers

Name: _____

Date: _____

Determine each ratio and simplify if necessary.



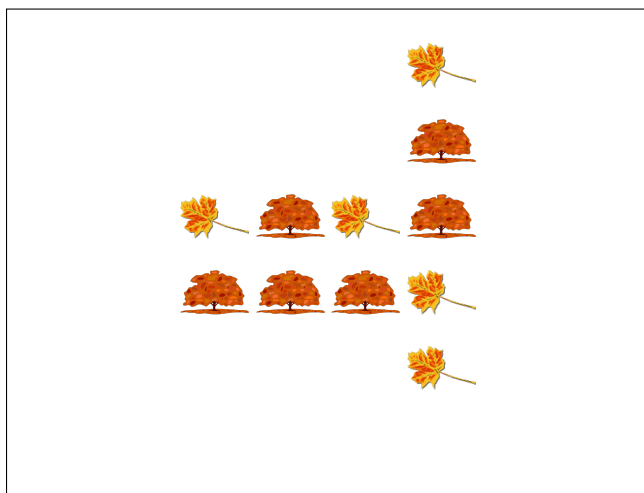
$$\text{Tree} : \text{Acorn} = 7 : 6$$

$$\text{Acorn} : \text{Tree} = 6 : 7$$



$$\text{Leaf} : \text{Twig} = 25 : 23$$

$$\text{Twig} : \text{Leaf} = 23 : 25$$



$$\text{Maple Leaf} : \text{Oak Leaf} = 5 : 6$$

$$\text{Oak Leaf} : \text{Maple Leaf} = 6 : 5$$



$$\text{Oak Leaf} : \text{Maple Leaf} = 26 : 22 = 13 : 11$$

$$\text{Maple Leaf} : \text{Oak Leaf} = 22 : 26 = 11 : 13$$