


Autumn Trees Picture Ratios (A)

Name: _____


Date: _____

Determine each ratio and simplify if necessary.




$$\text{leaf} : (\text{acorn} + \text{leaf}) =$$

$$\text{acorn} : (\text{leaf} + \text{acorn}) =$$




$$\text{leaf} : (\text{tree} + \text{leaf}) =$$

$$\text{tree} : (\text{leaf} + \text{tree}) =$$



$$\text{leaf} : (\text{tree} + \text{leaf}) =$$

$$\text{tree} : (\text{leaf} + \text{tree}) =$$



$$\text{orange leaf} : (\text{green leaf} + \text{orange leaf}) =$$


$$\text{green leaf} : (\text{orange leaf} + \text{green leaf}) =$$

Autumn Trees Picture Ratios (A) Answers

Name: _____


Date: _____

Determine each ratio and simplify if necessary.



$$\text{leaf} : (\text{acorn} + \text{leaf}) = 22 : 35$$

$$\text{acorn} : (\text{leaf} + \text{acorn}) = 13 : 35$$




$$\text{leaf} : (\text{tree} + \text{leaf}) = 11 : 21$$

$$\text{tree} : (\text{leaf} + \text{tree}) = 10 : 21$$



$$\text{leaf} : (\text{tree} + \text{leaf}) = 8 : 26 = 4 : 13$$

$$\text{tree} : (\text{leaf} + \text{tree}) = 18 : 26 = 9 : 13$$



$$\text{leaf} : (\text{tree} + \text{leaf}) = 24 : 44 = 6 : 11$$

$$\text{tree} : (\text{leaf} + \text{tree}) = 20 : 44 = 5 : 11$$