


Autumn Trees Picture Ratios (C)

Name: _____


Date: _____

Determine each ratio and simplify if necessary.




$$\text{Tree} : (\text{Leaf} + \text{Tree}) =$$

$$\text{Leaf} : (\text{Tree} + \text{Leaf}) =$$




$$\text{Branch} : (\text{Yellow Leaf} + \text{Branch}) =$$

$$\text{Yellow Leaf} : (\text{Branch} + \text{Yellow Leaf}) =$$



$$\text{Acorn} : (\text{Leaf} + \text{Acorn}) =$$

$$\text{Leaf} : (\text{Acorn} + \text{Leaf}) =$$



$$\text{Leaf} : (\text{Tree} + \text{Leaf}) =$$

$$\text{Tree} : (\text{Leaf} + \text{Tree}) =$$

Autumn Trees Picture Ratios (C) Answers

Name: _____


Date: _____

Determine each ratio and simplify if necessary.




$$\text{tree} : (\text{leaf} + \text{tree}) = 9 : 28$$

$$\text{leaf} : (\text{tree} + \text{leaf}) = 19 : 28$$




$$\text{branch} : (\text{leaf} + \text{branch}) = 7 : 27$$

$$\text{leaf} : (\text{branch} + \text{leaf}) = 20 : 27$$



$$\text{acorn} : (\text{leaf} + \text{acorn}) = 6 : 29$$

$$\text{leaf} : (\text{acorn} + \text{leaf}) = 23 : 29$$



$$\text{leaf} : (\text{tree} + \text{leaf}) = 10 : 16 = 5 : 8$$

$$\text{tree} : (\text{leaf} + \text{tree}) = 6 : 16 = 3 : 8$$