


Autumn Trees Picture Ratios (D)

Name: _____


Date: _____

Determine each ratio and simplify if necessary.




$$\text{leaf} : (\text{acorn} + \text{leaf}) =$$

$$\text{acorn} : (\text{leaf} + \text{acorn}) =$$




$$\text{maple leaf} : (\text{oak leaf} + \text{maple leaf}) =$$

$$\text{oak leaf} : (\text{maple leaf} + \text{oak leaf}) =$$



$$\text{tree} : (\text{branch} + \text{tree}) =$$

$$\text{branch} : (\text{tree} + \text{branch}) =$$



$$\text{leaf} : (\text{tree} + \text{leaf}) =$$


$$\text{tree} : (\text{leaf} + \text{tree}) =$$

Autumn Trees Picture Ratios (D) Answers

Name: _____


Date: _____

Determine each ratio and simplify if necessary.




$$\text{leaf} : (\text{acorn} + \text{leaf}) = 6 : 25$$

$$\text{acorn} : (\text{leaf} + \text{acorn}) = 19 : 25$$



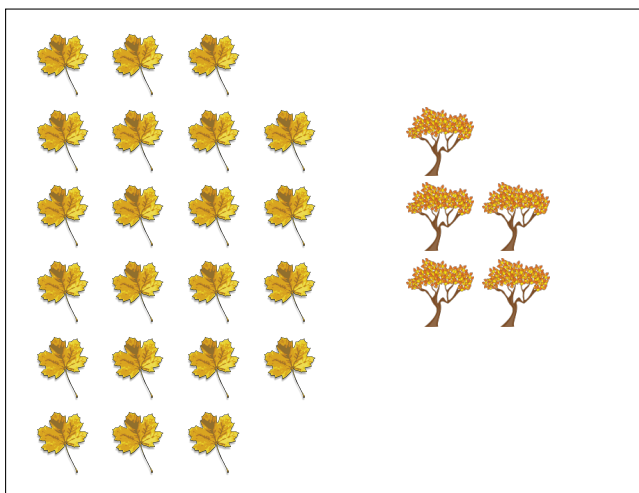
$$\text{maple leaf} : (\text{oak leaf} + \text{maple leaf}) = 13 : 22$$

$$\text{oak leaf} : (\text{maple leaf} + \text{oak leaf}) = 9 : 22$$



$$\text{tree} : (\text{branch} + \text{tree}) = 8 : 23$$

$$\text{branch} : (\text{tree} + \text{branch}) = 15 : 23$$



$$\text{leaf} : (\text{tree} + \text{leaf}) = 22 : 27$$

$$\text{tree} : (\text{leaf} + \text{tree}) = 5 : 27$$